

**PRIMARY TWO END OF TERM III EXAMS 2022
ENGLISH**

Name: _____

School: _____ Class _____

(Each Answer carries 2 marks)

1. Make small words from the big one.

classroom _____

teacher _____

window _____

policeman _____

shopkeeper _____

2. Give the opposite of the underlined words.

I have a small ball. _____

Her stockings are dirty. _____

I can see a tall tree. _____

The woman ate the big fish. _____

3. Read and draw.

Grand mother	food	stones
Tom's grandmother is reading a newspaper		These are three leaves.

4. What are they doing?











5. Fill in “have”, “has” , “is”, “are” correctly.

Terry _____ a new dress.

The children _____ playing.

The boys _____ a good ball.

The dog _____ running after the thief

6. Write in full.

Dr. _____

Feb. _____

7. Write any two months of the year.

1. _____

2. _____

8. Give the third day of the week.

9. Two children born on the same day by one mother are called. _____

10. Complete these sentences.



The girl is looking at _____



Mother is sitting a _____



Mr John is driving the _____



I am carrying a _____

10. Complete correctly.

I have _____ eyes.

We use a _____ for tasting.

A _____ teaches children.

I am _____ years old.

11. Form four correct sentences.

I		much hair on the head
Our baby	has	good manner
She		two feet
They	have	ten toes
He		black hair.

(i) _____

(ii) _____

(iii) _____

(iv) _____

12. Answer correctly using “in”, “over”, “under”, “on” and “in front”.



The pencil is _____ the cup.



The bird is flying _____ the house.



The cat is _____ the table.



The boy is _____ the chair.



The girl is standing _____ the car.

14. Read the dialogue and answer the questions.



Matina: Oh Ruth, I am glad to see you!

Ruth: Thank you Martina. How are you?

Matina: I am not fine. I fell down and I broke my legs.

Ruth: Oh! Sorry for you Martina. In which class are you.

Matina: I am in Primary two and my sister is in Primary three.

Ruth: Do you go to see the doctors?

Martina: Yes: I go every Monday with my sister.

Ruth: You will be fine soon. Will you go for the picnic?

Martina: No! I will miss it.

Answer the questions.

1. How many people are talking?

2. Who is in primary two?

3. When does Martina see the doctors?

4. In which class in Martina's sister?

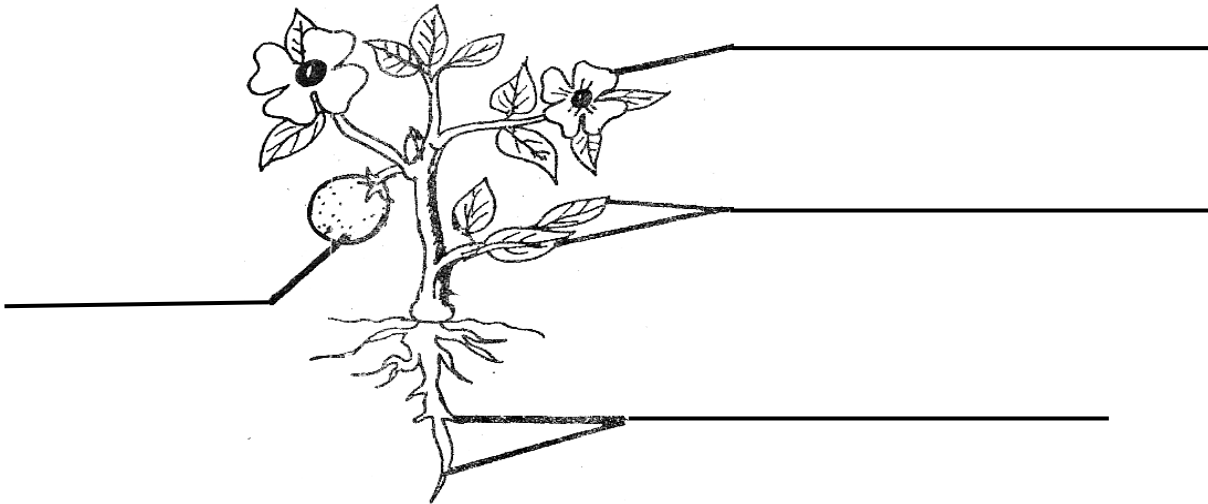
PRIMARY TWO END OF TERM III EXAMS

LITERACY ONE

Name: _____

School: _____ Class _____

1. Name the main parts of a plant.



2. Name any three basic needs of children.

(1) _____ (2) _____

(3) _____

3. Draw these places where we can keep our food.

cupboard	basket	fridge

4. Mention any two basic needs of animals.

(1) _____ (2) _____

5. Write down two non-living things.

(1) _____ (2) _____

6. Draw these family members.

grandmother	father	sister	brother

7. Match to their weapons.

man

horns

snake

teeth

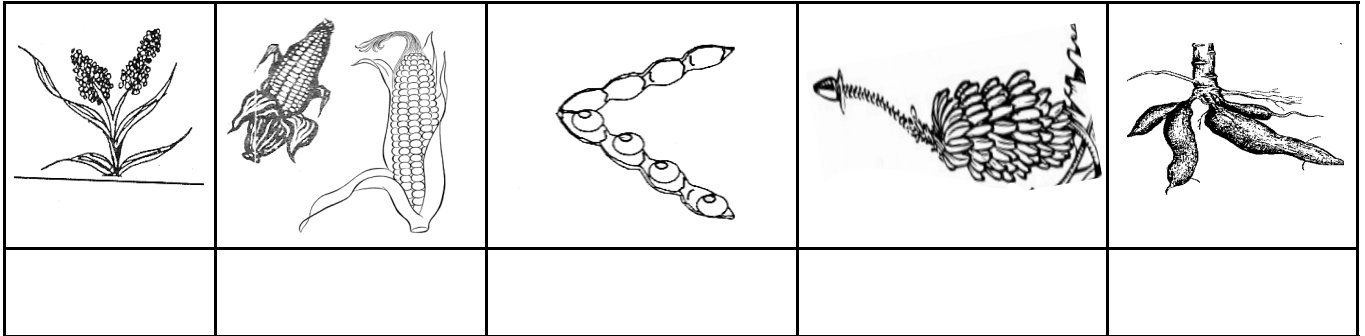
dog

fangs

chameleon

changes colour

8. Name the common food in our community.



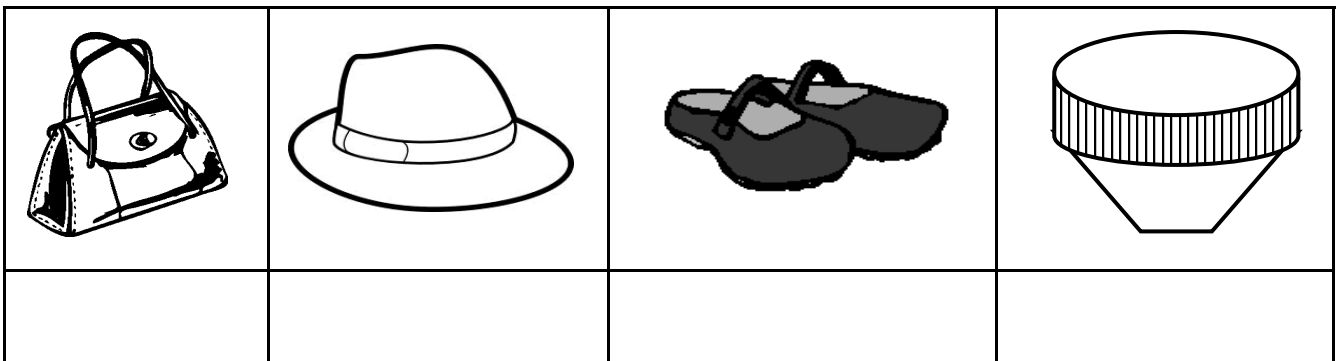
(kawo peas, matooke, millet, cassava)

9. Write two animals found at home.

(1) _____

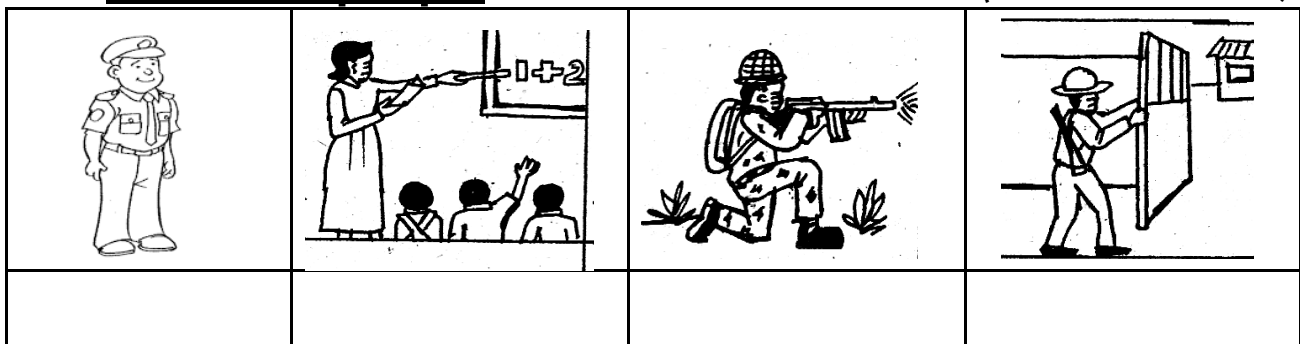
(2) _____

10. Name these things got from animal skins.



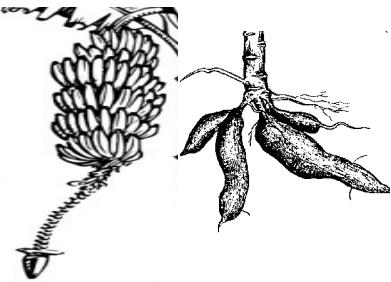


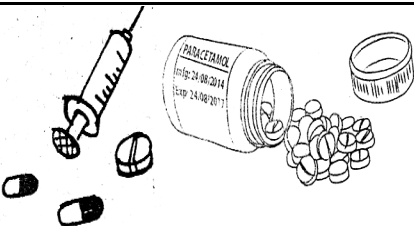


11. Name the people.

(Qn 16 Each answer 2 marks)




(soldier, gatekeeper, teacher, policeman)

12. Name what children need to grow well. (Qn 17 Each answer 2 m (ed-

education, food, shelter, water, clothes, medical care)

13.  Should children carry big things like that one?
(Yes, No) _____

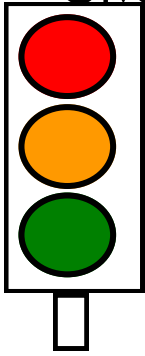
14. Draw these means of transport in our community.

bus	bicycle	aeroplane	car
camel	ship	train	lorry

15. Look at the traffic lights

(Qn 21 Each answer 2 marks)

Give their meanings



Red means _____

Orange means _____

Green means _____

16. Draw and name any two dangerous things on the road.

17. What can we make from banana fibres?

1) _____

2) _____

18. Tick two sources of food.

(Qn 15 Each answer 2 marks)

garden, rocks, moon, market, cloths, books

PRIMARY TWO END OF TERM III EXAMS

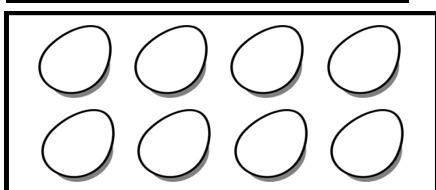
MATHEMATICS

Name: _____

School: _____ Class _____

1. **Name the sets.**





2. **Draw the sets.**

two women



two pencils



3. **Work out:**

$$2 + 8 = \underline{\hspace{2cm}}$$

$$4 \times 3 = \underline{\hspace{2cm}}$$

$$10 - 3 = \underline{\hspace{2cm}}$$

$$8 \div 2 = \underline{\hspace{2cm}}$$

4. **Write the number symbols.**

twelve _____

One hundred thirteen _____

fifty four _____

zero _____

5. **Fill in the missing numbers.**

113, 114, _____, 116, 117, 118, _____, 120

6. **Count in threes.**

3, 6, 9, _____, 15, 18, 21, _____, 27, 30, 33.

7. **Add these.**

$3 + 15 = \underline{\hspace{2cm}}$

$2 + 3 + 8 = \underline{\hspace{2cm}}$

$$\begin{array}{r} 2 \ 3 \\ + 1 \ 4 \\ \hline \\ \hline \end{array}$$

$$\begin{array}{r} 4 \ 3 \\ + 2 \ 0 \\ \hline \\ \hline \end{array}$$

Add 10 to 5 =

Annette has 11 sweets.

Tim has 13 sweets.

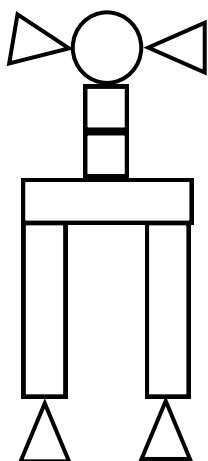
How many sweets do they have altogether?

Joan saw 23 cars.

Rita saw 14 cars.

How many cars did they see altogether?

8. **How many are they?**



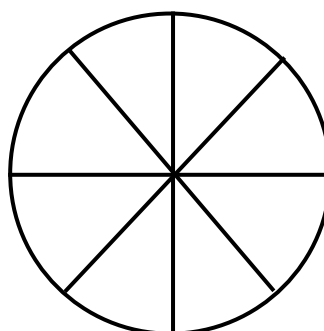
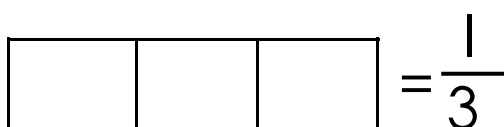
They are triangles.

They are rectangles.

They are squares.

There is **one** circle.

9. **Shade the fractions.**



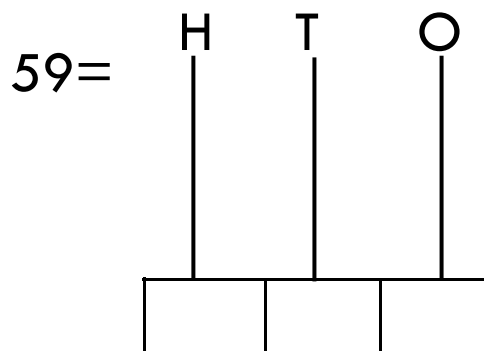
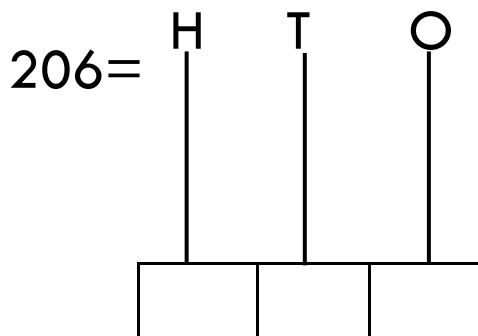
$\frac{4}{8}$

10. **Work out the fractions.**

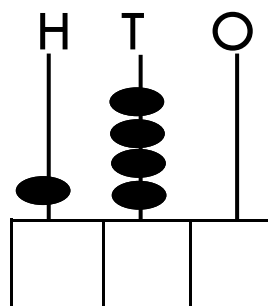
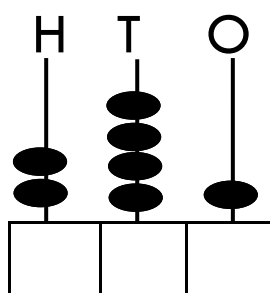
$$\frac{2}{5} + \frac{2}{5} =$$

$$\frac{7}{10} - \frac{2}{10} =$$


11. **Show the numbers on the abacus.**




12. **Count and write the numbers on the abacus.**



13. **Tell the time.**



It is a half past _____ o'clock.



It is _____ o'clock.

14. **Find the missing numbers.**

$$6 \square + \quad = 13$$

$$\square - \quad = 7$$

15. **Divide.**

$$21 \div 3 = \underline{\quad}$$

$$18 \div 2 = \underline{\quad}$$

Share 36 balls equally among 4 girls.

16. **Multiply.**

$$2 \times 10 = \underline{\hspace{2cm}}$$

$$6 \times 4 = \underline{\hspace{2cm}}$$

One car has four tyres.

How many tyres have two cars?

17. Study the price list.

Shs.200/=



Shs.400/=



Shs.200/=



How much is a book? _____

Teacher bought a pencil and a book.

How much did she pay?

18. Study the calendar and answer the questions.

November 2016

Sun	Mon	Tue	Wed	Thur	Fri	Sat
		1	2	3	4	5
6	7	8	9	10	11	12
13	14	15	16	17	18	19
20	21	22	23	24	25	26
27	28	29	30			

1. What is the month shown on the calendar?

2. Write the dates which fell on Sunday.

3. On which day did the month start?

4. How many days did the month have?

PRIMARY TWO END OF TERM III EXAMS

RELIGIOUS EDUCATION

Name: _____

School: _____ Class _____

Christianity.

1. **Name the gifts we give to our friends.**



(eggs, clothes, cards, foods, cake)

2. Mention two roles of children at home.

1) _____

2) _____

3. Who heads a family?

4. Write any two religious names.

1) _____ 2) _____

5. Where was Jesus born? _____

(Nazareth, Bethlehem, Mecca)

6. Name the king who wanted to kill Jesus. _____

(King Herod, King Saul, King Mutebi)

7. Draw these sources of light.

(1) sun (2) moon

8. Who killed his brother Abel? _____

(Cain, Seth, Abel, Esau)

9. Name two people who need our help.

1) _____

2) _____

10. Mention any two living things created by God.

1) _____ 2) _____

11. **Draw baby Jesus in the kraal.**

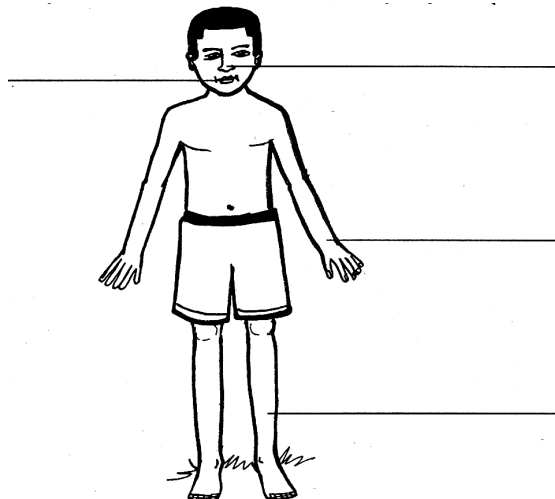


Islam

1. Write your Moslem name. _____
2. How many times do Moslems pray in a day?

3. Give two religious days Muslims celebrate.
1) _____ 2) _____
4. Who calls Moslems for prayers? _____
(Imam, Muezzin, Hajji, Mufti)
5. Match the following;

Hadijah	Mother of Mohammed
Abdullah	Father of Isaac
Amina	wife of Mohammed
6. Write two pillars of Islam.
1) _____ 2) _____
7. Underline two prayers said by Moslems.
Zuhur, Sapuli, 5 times, fasting, Aswir
8. Name two living things created by God.
1) _____ 2) _____
9. Mention two people who need our help.
1) _____ 2) _____
10. **Name the parts Moslems wash before prayers. (ablution)**



PRIMARY TWO END OF TERM III EXAMS
LITERACY TWO

Name: _____

School: _____ Class _____

Copy these patterns

1. Ee Ee Ee Ee Ee Ee

2. These are basic needs

3. feed need protected peace

4. chchchchchchchchchchchchchch

5. We go to church to pray

6. There are chairs in the church

7. Children sit on chairs in class

8. 

9. There are many cars in Jinja

10. Moslems go to mosques on Friday

II. holidays celebrate loneliness

PRIMARY TWO END OF TERM III EXAMS

READING

Name: _____

School: _____ Class _____

1. Read and draw.

woman	policeman	mosque	school

2. Read these sentences orally to the teacher.

This is my teacher.

We are praying.

The boys are playing with a ball.

The children are going to the mosque.

Tom is driving a lorry.

3. Make words with these sounds.

ba _____

st _____

oo _____

ca _____

4. Fill in the missing letters.

b ____ ll,

cl ____ n,

p ____ ce

t ____ n ,

b ____ d ,

t ____ ch

g ____ ft,

h ____ se,

l ____ ve,

hap ____

5. **Study the pictures and answer the questions.**



Answer the questions in full.

1. What is the thief doing in picture two?

2. Who is holding Mrs. Kaliisa's bag in Picture three?

3. Name the three people in picture four

1) _____ 2) _____

3. _____

4. Where is Mrs. Kaliisa going in picture one?

5. Who keeps law and order in picture four?

6. **Write the words and the sentences correctly.**

iarch _____

eetr _____

ookb _____

ncipel _____

hospital going iam to the

are flies These

are friends Mary and Musa

three A dog puppies has.
