

STANDARD JUNIOR SCHOOL – ZZANA

MID TERM ONE BREAK – HOME TESTS, 2020

P.2 LITERACY 1A

TIME: 1 HOUR 30 MINUTES



SECTION A	
SECTION B	
TOTAL	

NAME: _____




SECTION A (40 Marks)

1. Name two places we should clean at home.

a) _____

b) _____

2. Name these things we use to clean our home.

		
_____	_____	_____

3. What is transport?

4. Name the type of transport commonly used in your area.

5. Name any two people who keep peace and security.

a) _____

b) _____

6. **Draw these things we make.**

dolls	mat	pot	balls

7. Where do people cross busy roads from?

8. Identify two accidents at school?

a) _____

b) _____

9. Why do you come to school?

10. **Draw these people found in our community.**

gumboots	umbrella	leaf	sweater

11. How do we call a person who has got an accident?

[passenger, casualty]

12. Why should a person be given first aid?

13. **Match these materials to their sources.**

Clay	garden
Banana fibres	soil
Bricks	clay
Threads	swamp

14. What is the main natural source of light and heat?

15. **Draw an aeroplane.**



16. **Draw and name four road signs.**



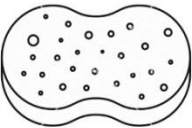
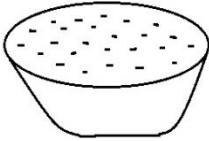
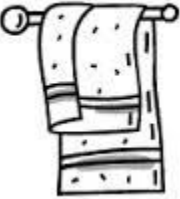
17. Identify the materials used to make the following crafts.

a) Pots _____

b) Ropes _____

SECTION B

18. **Name these things used to clean our body.**

19. What is a school?

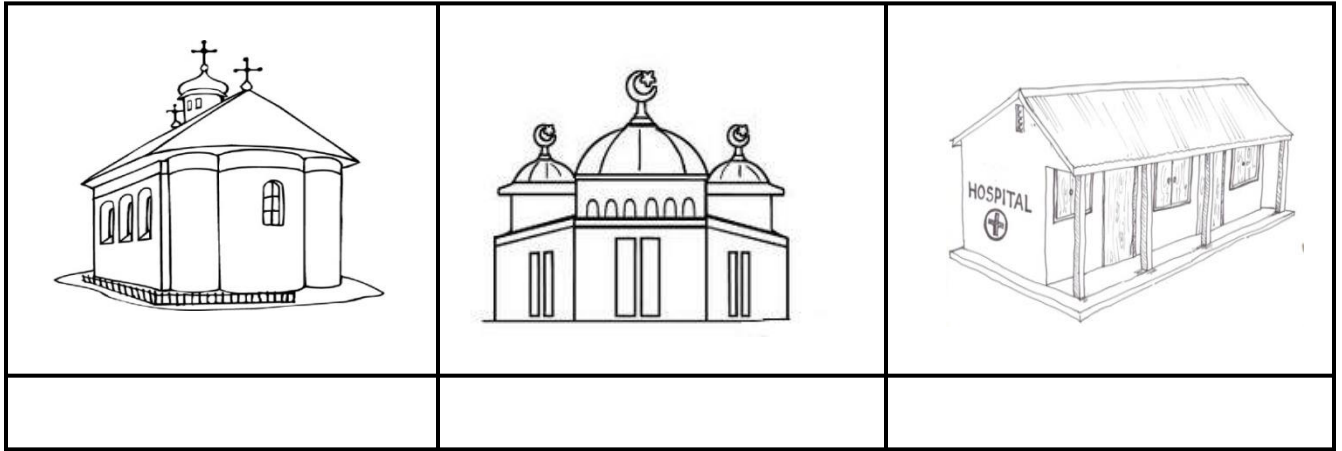
20. Match the following people to their roles.

Priest	keeps law and order
Imam	treats sick people
Doctor	preaches the word of God
Barber	leads prayers in the mosque
Policeman	cuts hair

21. Write any three things we buy from the market.

a) _____ c) _____
 b) _____

22. Name the building in our community.



23. Who is your grandmother?

24. Name any three members in an extended family.

a) _____ c) _____

b) _____

25. What is the name of your village where your school is found?

26. Draw these cultural practices.

Singing	cooking	dancing	praying

27. _____ is a group of people related by blood marriage or adoption.

28. Write the uses of these school needs.

Desks _____

Pencil _____

Water _____

Book _____

*****END*****