

STANDARD JUNIOR SCHOOL – ZZANA

MID TERM ONE BREAK – HOME TESTS, 2020

P.2 LITERACY IB

TIME: 1 HOUR 30 MINUTES



SECTION A	
SECTION B	
TOTAL	

NAME: _____

SECTION A (40 Marks)

1. Name the animal used for protection at home.

2. What do we call meat of a hen?

3. Name any one animal which has no legs.

4. Underline the body exercises.

Jumping, laughing, skipping, sleeping
running, eating

5. The tongue is used for _____

6. Why do we keep our finger nails short?

7. Write any two common diseases.

i) _____ ii) _____

8. Name these things used to carry out sanitation.

9. Which immunisable disease makes people lame?

10. What is food?

11. **Draw and name these examples of food from plants.**

cassava	matooke	carrots	beans

12. Give two reasons why we eat food?

i) _____

ii) _____

13. **Underline the food that provides proteins.**

millet, meat, rice, beans, posho, eggs

14. Write out vegetables from the list.

cabbages	chicken	_____
meat	tomatoes	_____
carrots	fish	_____

15. _____ means man and his surroundings.

[Environment, sanitation]

16. Give any two examples of domestic animals.

i) _____ ii) _____

17. Name any two animals that live in water.

i) _____ ii) _____

18. Which part of a bird helps it to fly?

19. a) How many main body parts does an insect have?

b) Write the main body parts of an insect.

c) Name the insect that gives us honey.

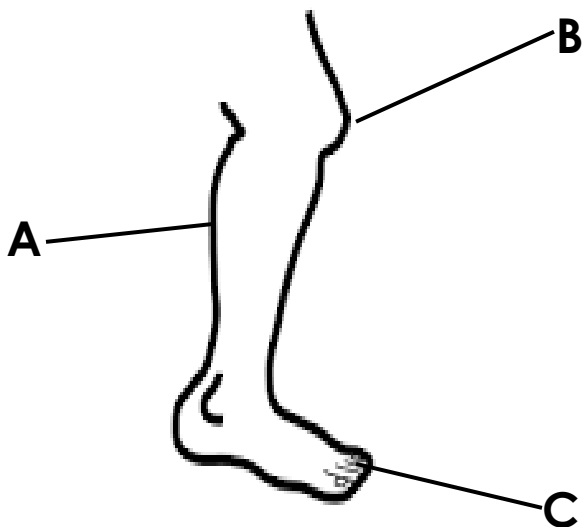
d) Give the uses of the following parts of an insect.

i) Spiracles _____

ii) Eye _____

SECTION B [60 marks]

20. a) **Name these parts of a leg.**



A _____

B _____

C _____


b) Legs are used for _____

21. a) Give any two examples of plants whose roots are eaten.

i) _____

ii) _____

b) **Name these parts of a plant.**



22. a) Give the young ones of the animals

Cow _____

Goat _____

Fish _____





b) Identify the animal that moves by running.

23. a) List down any two examples of seeds which are eaten by man.

i) _____

ii) _____

b) **Name these examples of food got from plants.**

24. a) A _____ is a young plant.

[seedling, fruit seed]

b) Give any three examples of things that have no life.



i) _____

ii) _____

iii) _____

25. a) Give the main natural source of light and heat.

b) Name these things that give us light.



26. a) Give any two things made of clay.

i) _____

ii) _____

b) Name any two containers used to keep water

i) _____

ii) _____

*****END*****