

STANDARD JUNIOR SCHOOL – ZZANA

MID TERM ONE BREAK - HOME TESTS, 2020

P.2 MATHEMATICS (SET 2)

TIME: 2 HOURS



SECTION A	
SECTION B	
TOTAL	

NAME: _____

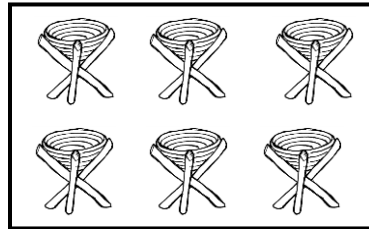
SECTION A (40 marks)

1. Addition: a) $5 + 8 =$ _____

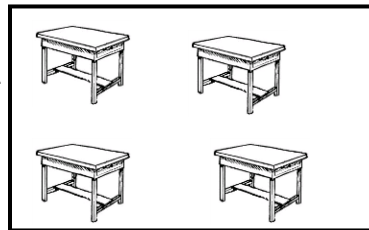
b)
$$\begin{array}{r} 8 \quad 6 \\ + 1 \quad 0 \\ \hline \end{array}$$

2. Name the sets.

a) A set of _____



b) A set of _____



3. Fill in the missing number.

a) 90, 92, _____, 96, 98, _____.

b) 103, 104, 105, _____, 107, 108

4. Take away:

a) $16 - 9 =$ _____

b)
$$\begin{array}{r} 8 \quad 7 \\ - 6 \quad 3 \\ \hline \end{array}$$

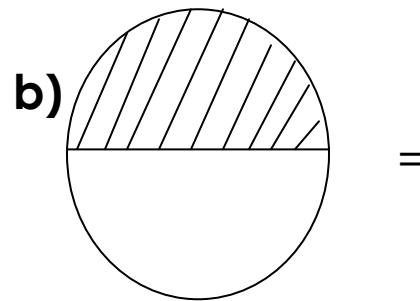
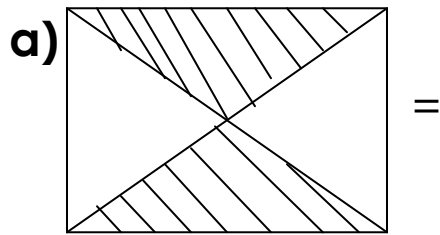
5. Complete the place value.

- a) 963 _____ hundreds _____ tens _____ Ones
 b) 47 _____ hundreds _____ tens _____ Ones
 c) 302 _____ hundreds _____ tens _____ Ones

6. Write the number symbol.

- a) One hundred sixty eight. _____
 b) Two hundred forty seven. _____
 c) One hundred eleven. _____

7. Name the shaded fractions.

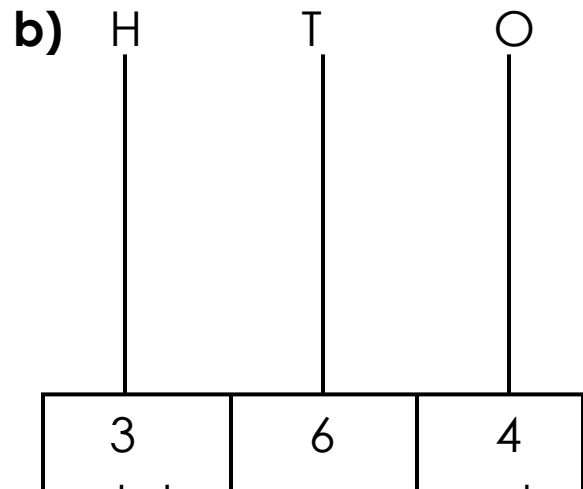
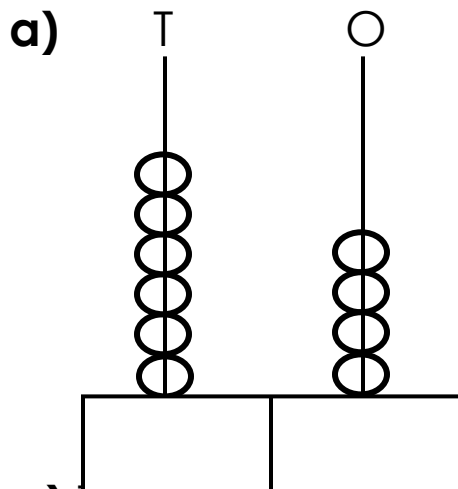


c) Workout:

i) $\frac{5}{10} + \frac{4}{10} =$ _____

ii) $\frac{9}{12} - \frac{3}{12} =$ _____

8. Complete the abacus.



- c) Ten boxes plus eight boxes equals to _____ boxes.

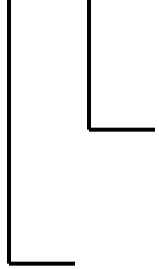
9. Circle the smaller number.

a) 85, 62, 14

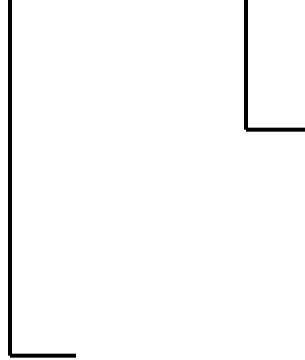
b) 73, 18, 49

10. Write the place value of the underlined digits.


a) 8 6 9



b) 4 7 6 2



11. a) Draw the missing cups to make seven.



b) Boxes up to nine.



12. Write the number before.

a) _____ 168

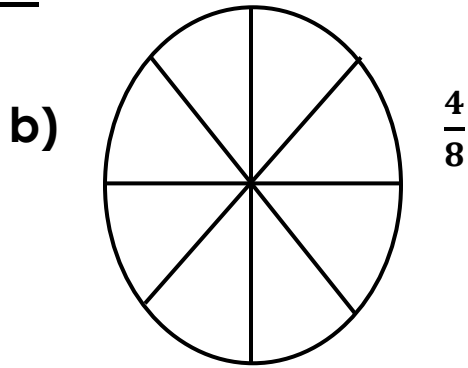
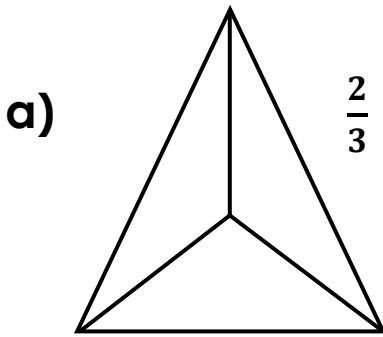
b) _____ 112

c) _____ 100

d) _____ 108

SECTION B

13. Shade the given fractions.



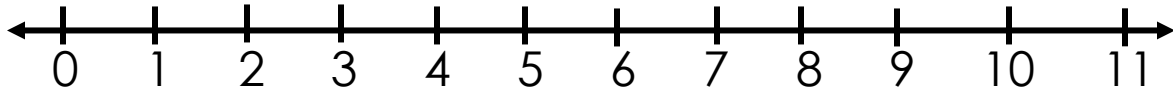
14. Expand these numbers.

a) $643 =$

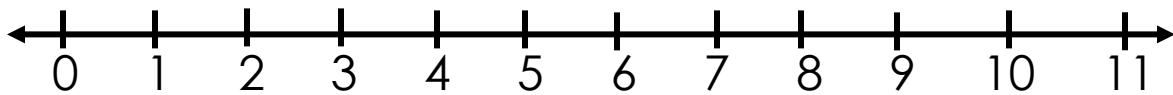
b) $79 =$

15. Add using a number line:

a) $6 + 4 =$



b) $5 + 6 =$




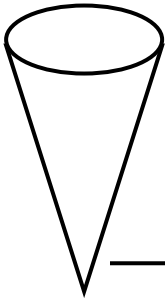
16. Multiply: a) $3 \times 8 =$

b) $4 \quad 3$

$$\begin{array}{r} \times \quad 2 \\ \hline \hline \end{array}$$

c) A table has 4 legs. How many do 5 tables have?

17. Name the shapes.



18. Workout:

a) How many months make up a year?

b) What is the third month of the year?

c) There are 7 days in a _____.

19. Match number name to number symbol.

Seventy six

105

Thirty three

98

Eighteen

78

One hundred five

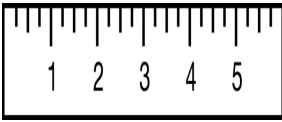
33

Ninety eight

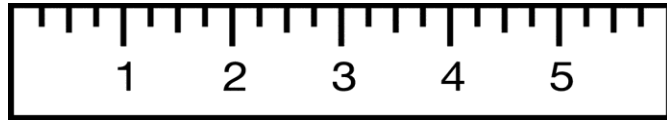
18

20. Compare using longer than or shorter than.

A



B




Ruler **A** is _____ ruler **B**.

Ruler **B** is _____ ruler **A**.

M



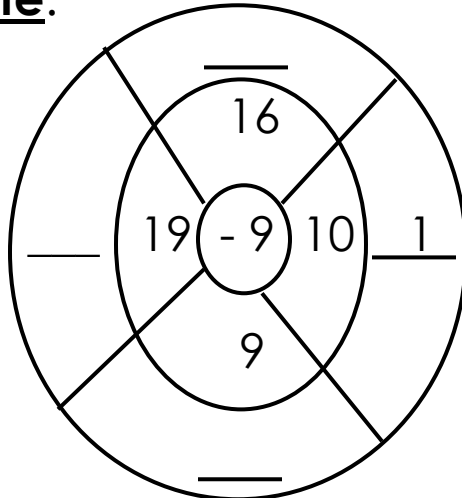
N



Blackboard **N** is _____ blackboard **M**.

Blackboard **M** is _____ blackboard **N**.

21. Complete:



22. Write the number between.

a) 68 _____ 70

b) 19 _____ 21

c) 99 _____ 101

****END****