

STANDARD JUNIOR SCHOOL – ZZANA

MID TERM ONE BREAK – HOME TESTS, 2020

LITERACY 1A

PRIMARY THREE

Time Allowed: 2 hours 15 minutes



SECTION A	
SECTION B	
TOTAL	

Name:

SECTION A

1. Write one activity farmers carry out in the dry season.

2. Name one symbol of a school.

3. How is a compass useful to a pilot?

4. Why do people keep domestic birds?

5. How do families meet their needs?

6. Give one example of a land form in our sub-county.

7. How is a picture similar to a map?

8. How do people spend their money wisely?

9. Why do we need class rules?

10. Give one example of people who work at school.

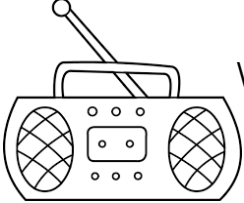
11. Which service do we get from hospitals?

12. Of what importance are cash crops to people?

13. State one way children are abused in our sub-county.

14. What type of soil is good for making pots?

15. Suggest one use of land in our community.

16.  What is the importance of this object to people?

17. Name any one company that sells fuel in your community.

18. Give one example of child abuse.

19. How are banana fibres useful in a school?

20. Why do few people use air transport?


21. How is money used in our community?

22. Give one reason for fencing our homes.

23. Name one animal which stays in water.

24. Why is a nurse needed in a school?

25. How is the road sign below important to road users?



26. Mention one example of a temporary house.

27. Suggest one way of locating a place.

28. Give one use of map symbols.

29. How is a cat useful in a home?

30. Identify the determinant point of a compass.

31. Name the social service provided at school.

32. What is money?

33. How are hospitals useful in a community?

34. Suggest one way people care for crops in the environment.

35. Name the biggest wild animal.

36. Why do people keep money in the bank?

37. Name the road sign below.

38. Who heads a school?

39. **Draw an arrow in the space provided below.**



40. Which type of clouds give us rainfall?

SECTION B


41. a) What do we call crops which are grown

i) For sale _____

- ii) For food _____
- b) Name one tool farmers use to do their work.

- c) Give one problem faced by farmers.

42. a) Name the item below.



b) What local materials is used to make the item above?

c) Write the use of these items in a home

i) mat _____

ii) chair _____

43. a) What are basic needs?

b) Name the basic need that protect people against bad weather.

c) Suggest two problems faced by family members when meeting their needs.

i) _____

ii) _____

44. a) What is the main source of water?

b) Give any two types of weather

i) _____

ii) _____

c) Write one use of sunshine in our environment.

45. a) Give one example of child abuse.

b) How are children's right abused in our sub-county?

c) Mention one cause of child abuse.

d) Name any one person who protects children.

46. Match A to B correctly.

A

Teacher

Fisherman

Pilot

Priest

B

church

airport

classroom

lake

47. a) Give one example of artificial source of water.

b) State two uses of water in our community.

i) _____

ii) _____

c) How can water sources be protected?

48. a) Why do we go to school?

b) Write any three items pupils use in a classroom.

i) _____ iii) _____

ii) _____

49. a) Name one tool used to keep the school clean.

b) Write any way pupils can keep the school clean.

c) Why do we keep the school clean?

50. a) What name is given to the activities people do to earn a living?

b) Write three examples of economic activities.

i) _____

ii) _____

iii) _____

51. a) Give one example of a project.

b) State any two things needed to start a project.

i) _____

ii) _____

c) Why do people start projects?

52. a) Give one use of a bank.

b) Name any two commercial banks in your sub-county.

i) _____

ii) _____

c) What name is given to a person who works in the bank?

53. a) What are legends?

b) Who is believed to be the first Muganda?

c) Mention any two sons of Kintu.

i) _____

ii) _____

54. Match the following correctly.

Iteso

Luo

Basoga

Ateso

Langi

Runyankole

Banyankole

Lusoga

55. a) Write any two economic activities done in your sub-county.

i) _____

ii) _____

b) Give the products got from the following

i) Sugarcanes

ii) Tobacco

******END******