



STANDARD JUNIOR SCHOOL- ZZANA

HOME TESTS, 2020

P.3 LITERACY ONE A (SET 5)

TIME ALLOWED: 2 HOURS

My name is: _____

SECTION A (40 MARKS)

1. Mention any one source of food in your sub-county

.....

2. Where do birds lay their eggs?

.....

3. List down any one component of the environment

.....

4. Outline one element of weather

.....

5. Write the sense organ for seeing

.....

6. Name the musical instrument drawn below



.....

7. Identify the main natural source of water

.....

8. Which domestic animal stays in the kennel?

.....

9. Point out one example of a domestic bird

.....

10. Mention any one man made change in the environment

.....

11. Where do wild animals live?

.....

12. Give one example of a harmful insect

.....


13. Name the insect that gives us honey

.....

14. Write one plant which provides us with fruits

.....

15. Draw and name one non-living thing in the space below



16. Write any one use of electricity at home

.....

17. Give any one item made from wood

.....

18. List down any one domestic animal

.....

19. Suggest the best soil for making pots

.....

20. In which direction does the sun set?

.....

21. State the danger of too much rainfall in the community

.....

22. What are natural changes?

.....

23. Mention the gas used for preserving soft drinks like soda.

.....

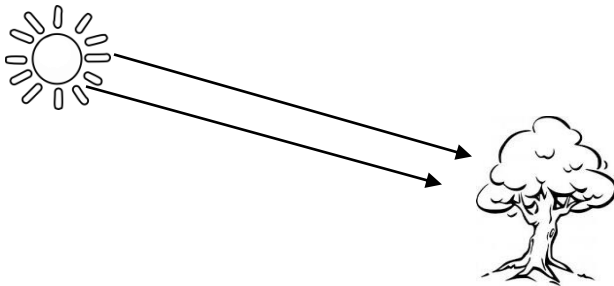
24. Why do animals move?

.....

25. Write any one example of a crop that grows well in swamps

.....

26. Draw the shadow of the tree drawn below



27. Give one childhood immunisable disease you know.

.....

28. What name is given to moving air in the atmosphere?

.....

29. Identify one place at home that should be kept clean.

.....


30. How many legs do most animals have?

.....

31. Give any one use of rain water to the environment.

.....

32. Name these things got from birds.



.....

33. Why do we boil water for drinking?

.....

34. Name the component of soil that makes loam soil fertile.

.....

35. Give one danger of too much sunshine.

.....

36. Write down one cause of road accidents.

.....

37. What are non-living things?

.....

38. Name one example of an insect that stings.

.....

39. Mention any one basic need of man.

.....

40. Name the habitat of a fish.

.....

SECTION B: 60 MARKS

41. What are living things?

.....

b. Mention the two major groups of living things

(i).....

(ii).....

c. Give one characteristic of living things

.....

42. What is the main natural source of heat and light energy?

.....

b. Draw these artificial sources of light.

Torch	Lamp	Candle

43. What are domestic animals?

.....
.....

b. Name any two domestic animals used for transport.


(i).....

(ii).....

c. Give any one use of domestic animals.

.....

44. Use the diagram of a bird below to answer question 41.



Name the parts marked with letters;

A

C

B

D

45. What are leguminous crops?

.....

b. Give two examples of leguminous crops

(i).....

(ii).....

c. Study the diagram and answer the question that follow.

Name the part marked P

.....

46. a).....is the growing of a seed into a new plant.

b. State two conditions needed for germination

.....
.....

c. Which part of a flowering plant develops into a fruit?

.....

47. Which food value do we get from fish?

.....

b. How are scales important to a fish?

.....

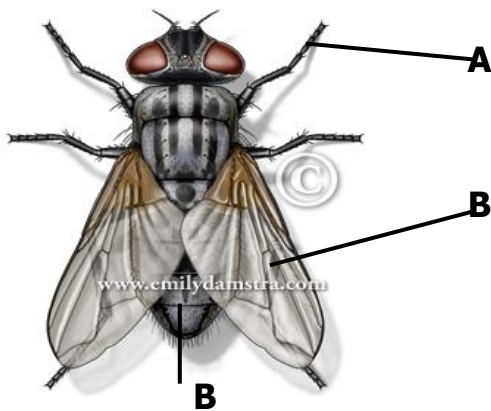
c. State any one way of preserving fish

.....

d. Apart from fish, name any other animal that lives in water.

.....

48. **Use the diagram of an insect below to answer question 46 (a).**



a) Name the parts marked:-

A **B** and **C**

b) Give one reason why insects move from one place to another?

.....

49. What are food crops?

.....

b. Give two examples of food crops

.....

.....

c. Of what importance are plants to people?

.....

50. What is poultry keeping?

.....

b. How can you care for domestic birds?

.....

.....

c. Apart from laying eggs, state any one characteristic of a bird

.....

51. Match these animals with their organs for protection

Dog

dorsal fin

Cow

teeth

Bee

sting

Fish

horn

a. Dog

b. Cow.....

c. Bee.....

d. Fish.....

52. What is food?

.....

b. Why do people eat?

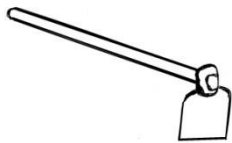
.....

.....

c. Which class of food do we get from eating fruits and vegetables?

.....

53. Name the garden tool shown below



.....

b. Apart from the above garden tool, give other two examples of garden tools

.....

.....

c. Name the garden tool used for transplanting

.....

54. Give two examples of common crops grown in your community

(i).....

(ii).....

b. Write down any two crops whose seeds are first grown in a nursery bed

(i).....

(ii).....

55. Name the body organ that;

i. Is used for seeing.....

ii. Is used for tasting food.....

b. Give any two ways of caring for our body organs

.....

.....