



STANDARD JUNIOR SCHOOL- ZZANA

HOME TESTS, 2020

P.4 SOCIAL STUDIES (SET 5)

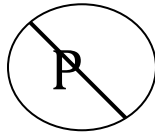
TIME ALLOWED: 2 HOURS

Name: _____

SECTION A:40 MARKS

1. Name one tool used by sailors to locate places.
.....
2. How is fencing important to a school?
.....
3. Give any one reason why a traditional leader is important in our community.
.....
4. Name any one river in Uganda.
.....
5. Why is it good for a child to belong to a family?
.....

The diagram below is a road sign use it to answer questions that follow



6. What does the road sign above represent?
.....
7. Give one importance of furniture to pupils at school.
.....
8. Mention any one state of weather.
.....
9. Mention one way the sun is important in the environment.
.....
10. What name is given to the highest peak of Mt. Elgon?
.....
11. Why is it dangerous to build a house in a swamp?
.....

12. Give one tribe of people under Nilo Hamites.

.....

13. Give any one use of trees in our school compound.

.....

14. How are nimbus clouds useful to crop farmers?

.....

15. Give one modern way of keeping fish for a long time.

.....

16. Why should school children wear uniform when going to school?

.....

17. State any one importance of a dam to Uganda.

.....

18. Give one environmental problem caused by charcoal burning.

.....

19. Give one product from palm oil as a cash crop.

.....

20. Draw a map symbol which represents a factory

21. State one cause of population decrease.

.....

22. Identify one safe way of using a road.

.....

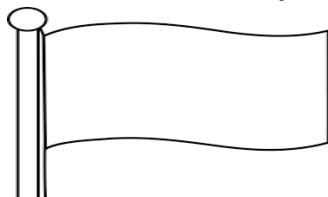
23. In which one way is a forest important to a carpentry industry?

.....

24. The arrow of a wind vane was facing West. In which direction was the wind blowing?

.....

25. Of what importance is the school symbol below?



.....

26. Identify any one social service centre in your division.

.....

27. State one importance of the rain gauge in a weather station.

.....

28. State one role of a barber in a school.

.....

29. Suggest one importance of class rules and regulations.

.....

30. Mention one way of promoting peace and security at school.

.....

31. State any one cause of high population in an area.

.....

32. Name one place where social activities take place.

.....

33. How are banana fibres useful in our community?

.....

34. Write another name for relief rainfall.

.....

35. Who is a leader?

.....

For questions 36 to 40, answer either Christianity or Islam but not both

36. **Either:** Name any one Gospel writer according to the Bible.

.....

Or: Name one person who received a holy book from Allah.

.....

37. **Either:** How did Jesus Christ show concern for the suffering people?

.....

Or: How did Prophet Muhammad (PBUH) show concern for slaves?

.....

38. **Either:** On which mountain did Noah's Ark rest after the floods?

.....

Or: On which mountain did Nuhu's ark rest after the floods?

.....

39. **Either:** Mention the first Christian Martyr.

.....

Or: Who was the first Martyr in Islam?

40. **For both:** Give one reason why you should forgive people who do bad to you.

SECTION B:60 MARKS

41. Name one condition farmers need to grow crops.

b) Give one example of each of the following.

i. Non-traditional cash crops.....

ii. Traditional cash crops.....

c) Mention one tool farmers use to grow crops.

42. What is meant by the term communication?

b) Give two examples of modern means of communication.

(i).....

(ii).....

c) State any one importance of a T.V at school.

43. Mention any two examples of social activities.

(i).....

(ii).....

b) Identify two places where people usually spend their leisure time.

44. Give two reasons why people migrate from one place to another.

(i).....

(ii).....

b) Suggest one way of encouraging urban-rural migration.

c) State one problem people face due to over population.

45. Match social service to service providers.

Education

builders

Security

judges

Transport

head teachers

Housing

pilots

Education
Security
Transport
Housing

46. Give any two ways in which school going children can avoid being kidnapped.

(i).....

(ii).....

b) Mention any two needs of a school going child.

(i).....

(ii).....

47. Name any one mountainous district in Uganda.

.....

b) State any two activities done around mountains.

(i).....

(ii).....

c) Give one problem faced by people around mountains.

.....

48. Which language is commonly used in offices of our district?

.....

b) Name the language spoken by the Bagisu.

.....

c) Identify the two tribes in Uganda that commonly practice circumcision as a culture.

(i).....

(ii).....

49. What title is given to the head of a clan?

.....

b) State two symbols of a clan.


(i).....

(ii).....

c) Write any one role of a cultural leader.

.....

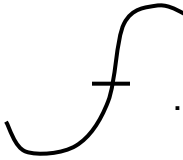
50. Name these map symbols.



.....



.....



.....



.....

For questions 51 to 55, answer only "Either" or "Or" but not both

51. Either: "In the name of the Father, the Son and the Holy Spirit"

a)What general name is given to the three persons above?

.....

b)Match the persons to the roles

God the Father

creator

God the Son

helper

God the Holy Spirit

savior

Or: Write any two symbols of Islam.

(i).....

(ii).....

b) Mention any two problems facing Islam today.

(i).....

(ii).....

52. Either: How did God save the people from floods?

.....

b) According to Genesis, how many people survived the floods?

.....

c) Apart from people, name any two other animals that were saved from floods.

(i).....

(ii).....

Or: How did Allah save his people from floods?

.....

b) How many people survived the floods?

.....

c) Apart from people, name any three other animals that were saved from floods.

(i).....

(ii).....

(iii).....

53. Either: Fill in correctly.

i. The apostle Jesus loved most.....

ii.betrayed Jesus Christ.

iii.was at first a fisher man.

b) What name is given to the first twelve people Jesus chose to help him in his work?

.....

c) Apart from people, name any two other animals that were saved from floods.

(i).....

(ii).....

Or: Write any two female Muslim names you know.

(i).....

(ii).....

b) Fill in correctly.

i. A.....is a holy book in Islam.

ii. A.....calls moslems for prayers

54. Either: According to the Bible, St. Stephen was the first Martyr. How did he meet his death?

.....

b) Mention two ways Christian converts were killed in Uganda during Mwanga's reign.

(i).....

(ii).....

c) What lesson do school children learn from St. Kizito as a martyr?

.....

Or: Who was the first martyr in Islam?

.....

b) What lessons do school children learn from Moslem Martyrs?

.....

c) Name two Moslem martyrs.

(i).....

(ii).....

55. For both:

a. Write any two qualities of a good Christian/ Muslim.

(i).....

(ii).....

b. Give any two types of prayers.

(i).....

(ii).....