

# KINGS SCHOOLS – KABOWA

MID TERM ONE BREAK – HOME TESTS, 2020

## SOCIAL STUDIES (SET 2)

PRIMARY FOUR

*Time Allowed: 2 hours 15 minutes*

SECTION A	
SECTION B	
TOTAL	

Name: .....

### SECTION A

1. Write SST in full.

\_\_\_\_\_

2. Name the first animal to be tamed by man.

\_\_\_\_\_

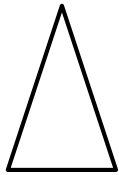
3. Give one example of a natural forest.

\_\_\_\_\_

4. What do we call the movement of people and goods from one place to another?

\_\_\_\_\_

5. What does the symbol below represent on a map?



\_\_\_\_\_

6. Name the main natural source of water.

\_\_\_\_\_

7. Mention one crop grown in swamps.

\_\_\_\_\_

8. Write down the motto of your school.

\_\_\_\_\_

9. What is a legend?

\_\_\_\_\_

10. Where does the sun rise from?

\_\_\_\_\_

11. In which region is Kampala capital city located?

\_\_\_\_\_

12. What is the main duty of the police?

\_\_\_\_\_

13.  Name the road sign shown above.

\_\_\_\_\_

14. Explain the term environment.

\_\_\_\_\_

15. Write down one example of a radio station in Uganda.

\_\_\_\_\_

16. Who is believed to be the first Muganda?

\_\_\_\_\_

17. Name the school symbol which is always observed on school assemblies.

\_\_\_\_\_


18. What do we call the imaginary lines on a map that runs from East to West?

\_\_\_\_\_

19. Give one example of a lake found in Uganda.

\_\_\_\_\_

20. **Draw a map of a tree in the space below.**



21. How useful is a uniform to a school child?

\_\_\_\_\_

22. Where do doctors work?

\_\_\_\_\_

23. Name one source of light.


\_\_\_\_\_

24. Where do sick people go for treatment?

\_\_\_\_\_

25. What do we call the highest point of a mountain?

\_\_\_\_\_

26.  Name the craft shown above.

---

27. Give one use of lakes to man.

---

28. Mention one use of forests to man.

---

29. Name one animal used for transport.

---

30. What term is given to a person below eighteen years of age?

---

31. Name one immunisable disease you know.

---

32. Give one example of children's rights.

---

33. Identify one reason why people cut down trees.

---

34. Which map element enables a map reader to tell what a map is about?

---

35. State one example of a community place.

---

**For numbers 36 – 40, answer Either Christianity or Islam but not both in one number.**

36. **Either:** Who is said to be the creator of heaven and earth?

---

**Or:** Who is said to be the creator of heaven and earth?

---

37. **Either:** Name the first man according to Christianity.

---

**Or:** Name the first man according to Islam.

---

38. **Either:** Who is a prophet?

---

**Or:** Who is a Muazzin?

---

39. **Either:** On which day do Christians go for congregational prayers?

---

**Or:** On which day do Muslims go for Juma prayers?

---

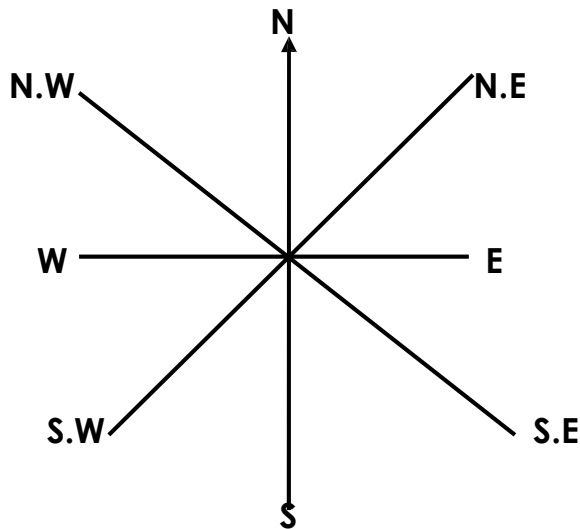
**40. Either:** Write down any one symbol of a Christian family.

---

**Or:** Write one symbol in Islam.

---

**SECTION B**



**41. a)** Name the instrument shown above.

---

b) Mention any two groups of people who use the above instrument.

i) \_\_\_\_\_ ii) \_\_\_\_\_

c) In which direction does the main needle of the above instrument always point?

---

**42. a)** List down any two domestic animals.

i) \_\_\_\_\_ ii) \_\_\_\_\_

b) Mention two things got from domestic animals.

i) \_\_\_\_\_ ii) \_\_\_\_\_

**43. a)** What is the use of water to man?

---

b) Mention three places where water can be got from.

i) \_\_\_\_\_ iii) \_\_\_\_\_

ii) \_\_\_\_\_

**44. a)** Write the following in short:

i) The AIDS Support Organisation

---

ii) Local Council

---

b) What title is given to the political head of a district?

---

c) What are by-laws?

---

**45.** a) Identify the three elements of a map.

i) \_\_\_\_\_

ii) \_\_\_\_\_

iii) \_\_\_\_\_

b) Why are map symbols used on a map?

---

**46.** a) Define the following terms;

i) Food crops

\_\_\_\_\_

\_\_\_\_\_

ii) Cash crops

\_\_\_\_\_

\_\_\_\_\_

iii) Non-traditional cash crops

\_\_\_\_\_

\_\_\_\_\_

b) Write down one example of food crop.

---

**47.** a) List down any three colours of the Uganda National Flag.

i) \_\_\_\_\_

ii) \_\_\_\_\_

iii) \_\_\_\_\_

b) Who designed the Uganda National Flag?

---

**48.** a) What are physical features?

\_\_\_\_\_

\_\_\_\_\_

b) Give three examples of physical features.

i) \_\_\_\_\_

- ii) \_\_\_\_\_
- iii) \_\_\_\_\_

**49.** Write down the following in full.

- i) DPC \_\_\_\_\_
- ii) U.P.E \_\_\_\_\_
- iii) RDC \_\_\_\_\_
- iv) DR \_\_\_\_\_

**50.** a) Identify any one lake in Uganda which is used for salt mining.

\_\_\_\_\_

b) Name two rivers in Uganda.

- i) \_\_\_\_\_
- ii) \_\_\_\_\_

c) Which is the longest river in Uganda?

\_\_\_\_\_

**For numbers 51 – 55, answer either Christianity or Islam but not both.**

**51. Either:**

a) How long did God take to create the world?

\_\_\_\_\_

b) Why Did God create man?

\_\_\_\_\_

c) On which day did God rest after the work of creation?

\_\_\_\_\_

d) Apart from man, mention one other creature of God.

\_\_\_\_\_

**Or:**

a) How long did Allah's creation take?

\_\_\_\_\_

b) Why did Allah create man?

\_\_\_\_\_

c) On which day did Allah rest after the work of creation?

\_\_\_\_\_

d) Apart from man, mention one other creature of Allah.

\_\_\_\_\_

**52. Either:**

a) What does the term gospel mean?

---

b) Write three gospel books in the Bible.

i) \_\_\_\_\_

iii) \_\_\_\_\_

ii) \_\_\_\_\_

**Or:**

a) What does the term Hegira mean?

---

b) Write down three Holy books in Islam.

i) \_\_\_\_\_

iii) \_\_\_\_\_

ii) \_\_\_\_\_

**53. Either:**

a) Which son of Adam was killed by his brother?

---

b) Why did the son of Adam kill his brother?

---

c) Give one way in which God punishes sinners.

---

d) What should a P.4 child do after sinning?

---

**Or:** Give any four things which a Muslim who is fasting is advised to do.

i) \_\_\_\_\_

ii) \_\_\_\_\_

iii) \_\_\_\_\_

iv) \_\_\_\_\_

**54. Either:**

a) According to the Bible whom did God call in a burning bush?

---

b) What did the above person do to show that he was standing on a holy land?

---

c) Why did God call the above person?

---

d) State one quality that the above person showed to God.

---

**Or:**

a) What is Saum?

---

b) In which holy month is Saum performed?

c) State two benefits of Saum.

- i) \_\_\_\_\_
- ii) \_\_\_\_\_

**55. Either:**

a) Name the prayer that Jesus taught his disciples.

\_\_\_\_\_

b) State two requests made in the above prayer.

- i) \_\_\_\_\_
- ii) \_\_\_\_\_

c) Write down one reason why Christians should pray.

\_\_\_\_\_

**Or:**

a) What is the duty of Imam to Muslims?

\_\_\_\_\_

b) Mention any three prayers Muslims pray in a day.

- i) \_\_\_\_\_
- ii) \_\_\_\_\_
- iii) \_\_\_\_\_

**\*\*\*\*END\*\*\*\***