

LOHANA SCHOOLS

P.4 MATHEMATICS REVISION WORK: 2020

ACTIVITY ONE

1. Subtract 36 eggs from 94 eggs.
2. Bruno wrote 234 in his book. Write Bruno's number in expanded form using values.
3. Find the sum of $\frac{1}{8} + \frac{3}{8}$
4. Share sh.2000 between two boys.
5. Name the shape below.



6. Name the set symbol shown as \emptyset
7. Complete the sequence: 20, 30, 40, 50, ____, ____
8. Workout: a) $9623 + 397$ b) $36 \div 9$

9. a) Form the following sets;
i) A set of 6 bottles. ii) A set of the first 6 whole numbers.
b) Name the sets below;

i) $A = \{a, e, i, o, u\}$

ii) ii) $C = \{0, 2, 4, 6, 8\}$

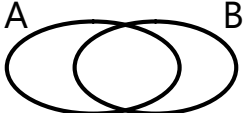
iii) What name is given to a set with no elements?

iv) $A = \{\bigcirc \triangle \square \square\}$ Name this set.

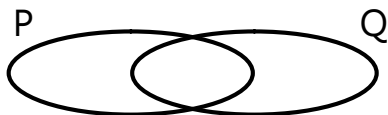
v) P is a set of the five English vowels. List members of set P.

vi) $M = \{a, b, d, e\}$ $N = \{a, e, i, o, u\}$ Find $M \cap N$

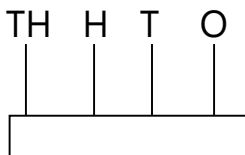
vii) $Q = \{a, b, c, d\}$ $R = \{d, a, c, b\}$ Set Q and R have same members. What name do we give to set Q and R?

10. Shade $A \cap B$ 

- 11.
12. Set P = {2, 3, 4, 5, 6} set Q = {0, 2, 4, 6, 8} Complete the Venn diagram below.



13. How many members are in set B if $B = \{0, 1, 2, 3, 4, 5, 6, 7, 8, 9\}$
14. What are equivalent sets?
15. Write 2018 in words.
16. Write the place value of 2 and 3 in the number 39,248
17. Show 3045 on the abacus.



18. Write the value of 7 in the number 5786

P.4 ENGLISH REVISION WORK ACTIVITY ONE: 2020

1. Use the given words to complete the story.

Electricity is a _____ of _____. We also call it _____ because it does work. We use electricity in our _____ and in _____. Electricity runs _____ in factories. In our homes, we use it for cooking _____ ironing _____, giving light and charging _____ for mobile _____.

phones, energy, homes, machines, factories, clothes, source, power, batteries, food

Write the following words correctly.

2. qusare _____

3. lcean _____

4. kbalc _____

Write a small word from the big one.

5. Smart _____

6. garage _____

7. pancake _____

Rewrite and punctuate the sentences correctly.

8. mary is a kind girl

9. he isnt my brother

10. where have you been

11. tom jane and sarah are playing

Arrange the following words in dictionary order.

12. blue, black, block, blind

13. come, take, give, dance

14. dot, den, dusk, dark

15. tall, young, fat, quick, hungry

Write the following in full.

16. don't _____

17. Mr. _____

18. Rd _____

19. TV _____

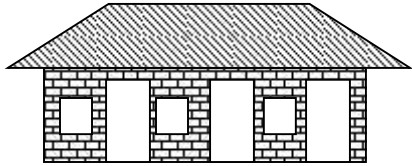
Give the opposite of

20. first _____

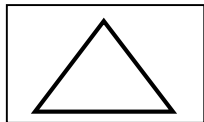
21. fast _____

P.4 SOCIAL STUDIES REVISION WORK ACTIVITY ONE: 2020

1. What is a map?
2. How are crafts important to people?
3. Why do school children wear uniform?
4. What is a family?
5. Mention any one tribe found in our district.
6. What are domestic animals?
7. a) Name the social service provided from the place below.



- b) Mention any one cause of conflicts between a school and a community.
 - c) How is a school important to a community? (Give two ways)
9. What is a map?
 10. Draw a map symbol of a pot.
 11. Name any one type of maps.
 12. How is a map important to a person moving to a new place?
 13. Why are symbols used on maps not real objects?
 14. Name the map symbol drawn below;



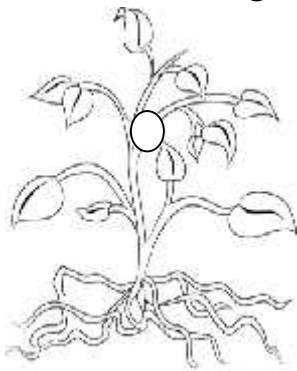
15. a) Mention two ways of locating places in our district.
 - b) What is a picture?
 - c) Give the difference between a map and a picture.
16. Draw the map symbols of the following.

A hill	A rift valley	A swamp	A quarry

17. What is trade?
18. Give one way how drought affects the crop farmers.
19. How is a compass important to a pilot?
20. State one reason why a primary four classroom must have a dustbin.
21. Mention the symbol of a school which is used for identification?
22. a) Give any two causes of problems between the school and the community.
- b) Give one way how a school benefits the neighbours.
- c) Give one way the neighbours benefit the school.

P.4 SCIENCE REVISION WORK ACTIVITY ONE: 2020

1. Identify any one example of a flowering plant you know.
2. What do we call the plant system found under the ground?
3. Name any one sensory organ of the body.
4. Which component of air do plants use for photosynthesis?
5. Apart from the gas mentioned in No.4 above, mention any other component of air you know.
6. Which health activity do we do after visiting the toilet?
7. a) What is first aid?
b) Write down any three items found in a first aid box.
8. a) What are flowering plants?
b) How do most flowering plants reproduce?
8. Name the system of a flowering plant where leaves are found.
9. Give one example of a flowering plant at school.
10. What we call plants which do not bear flowers.
11. Why are groundnuts called flowering plants?
12. Give one importance of plants at school.
13. Which part of a flowering plant has the stomata?
14. Below is a diagram of a flowering plant. Use it to answer questions that follow.



- a) Name the plant system marked X.
 - b) Which part of a flowering plant grows into new leaves?
 - c) In which way are the parts marked M and N useful to a plant?
15. Give one use of roots to plants.
 16. Draw a fibrous root system.
 17. Name one example of a plant with a tap root system.
 18. Give one use of roots at home.
 19. How is the root cap important to a plant?
 20. Which part of the root system absorbs water and mineral salts from the soil?
 21. Name any one part of a plant that can act as a fuel at home.
 22. Give one use of stems to people.

P.4 RELIGIOUS EDUCATION REVISION WORK ACTIVITY ONE: 2020

1. Either: What is the meaning of the word Genesis?
Or: Write down the prayer said by the Muslims in the morning.
2. Both: In how many days did God/Allah create the universe?
3. Both: How is rain important to man?
4. Either: Who wrote the book of Genesis?
Or: Name the prophet of Allah who was given the Holy Quran.
5. Either: What is the meaning of Sabbath?
Or: What does the word Surat mean?
6. Either: List down the things that God created.
 - a) On the first day
 - b) On the 4th dayOr:
 - a) Why did Allah create man?
 - c) Name the first person to be created.
7. Both: From what material did God create Adam?
8. Both:
 - a) How was Eve/Hawa created?
 - b) List and draw the 3 things that God created on the 4th day?
9. Either:
 - a) Why was Adam and Eve sent out of the garden of Eden?
 - b) Write down any one punishment God gave to Eve.
 - c) Mention the 2 sons of Adam and Eve.Or:
 - a) Mention any 2 ways Prophet Muhammed showed that he loved his people.
 - b) Why are the Caliphs important in Islam?