

NAMAGUNGA PRIMARY BOARDING SCHOOL

P.7 REVISION WORK (SET 1) TERM I 2020 SOCIAL STUDIES & RELIGIOUS EDUCATION

Time allowed:

2 Hours 15 Minutes

EMIS NO.						PERSONAL NO.		

Index No;

Candidate's Name:.....

Candidate's Signature:.....

District:.....

DO NOT OPEN THIS BOOKLET UNTIL YOU ARE TOLD TO DO SO

**FOR EXAMINERS' USE
ONLY**

Read the following instructions carefully:


1. This paper has **two** Sections: **A** and **B**.
2. Section **A**, has **40** questions (40 marks)
3. Section **B** has **15** questions (60 marks).
4. Answer **ALL** questions: All answers to both Sections **A** and **B** must be written in spaces provided in full sentences.
5. All answers must be written using a blue or black ballpoint pen or ink but not pencil. All work done in pencil except diagrams will **NOT** be marked.
6. Unnecessary alteration of work will lead to loss of marks.
7. Any handwriting that cannot be easily read, may lead to loss marks.

FOR EXAMINERS' USE ONLY

QN. NO.	MARK	SIGN
1-10		
11-20		
21-30		
31-40		
41-43		
44-46		
47-49		
50-52		
53-55		
TOTAL		

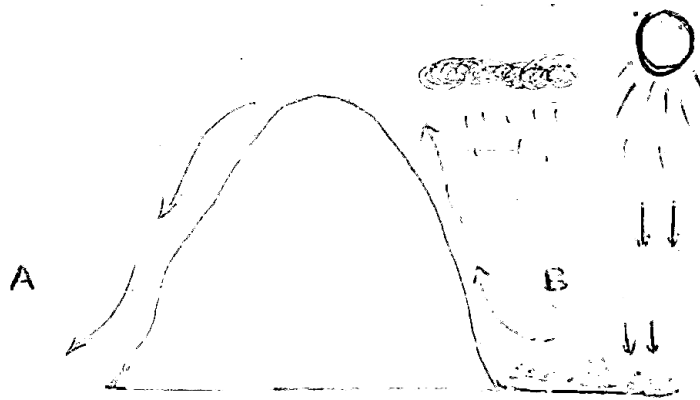
SECTION A

1. Name the element of a map that is used to interpret symbols.
.....
2. It is 8:00 a.m in Accra – Ghana. What time is it in Kigali-Rwanda
Which is 30°E of the Greenwich median?
.....
3. Which type of natural vegetation favours the location of game parts in
East Africa?
.....
4. Mention any one duty of the District Director of Health Services
(DDHS) in the district.
.....
5. How is a good road network important to rural farmers?
.....
6. State any one symbol of a clan in our society.
.....
7. Why do most rivers in East Africa flow towards the Indian Ocean?
.....
8. Give any one reason why Kabaka Muteesa I developed mistrust in
Christian missionaries.
.....
9. Draw a map of a tree in the space provided below.



10. Mention any one physical feature which is associated with landslides in the environment.
.....
11. How did iron smelting contribute to the development of the chwezi Dynasty?
.....
12. Give any one duty of the Uganda Prisons service to the community.
.....
13. State any one material used in basic technology.
.....
14. Give any one reason why children should know their rights.
.....
15. Mention any one traditional means of communication used in Uganda.
.....
16. Why are rice and sugarcane commonly grown in swampy areas?
.....
17. Mention any one form of corruption in our society.
.....

Study the diagram below carefully and use it to answer question 18 and 19.



18. Give the major reason why side A is not good for crop growing.

.....

19. Which type of rain fall is shown in the diagram above?

.....

20. How did King Kasagama of Toro benefit from the coming of Captain Fredrick Lugard?

.....

21. Give any one effect of poor waste management in the environment.

.....

22. State any one way apartheid was practiced in South Africa.

.....

23. Write **NIN** in full.

.....

24. Mention any one way assimilation policy was practiced in West Africa by the French.

.....

25. Give any one challenge faced by electoral process in Uganda.

.....

26. Name the East Africa country which is not a member of COMESA.

-
27. How does limestone promote the construction industry in Uganda?
-
28. Why is it important to have a sunshine recorder at the weather station?
-
29. State any one way cultural institutions have promoted economic development of Uganda.
-
30. Give one way the government of Uganda can control extinction of fish in her water bodies.
-
31. Apart from building Uganda railway, how else did colonialists improve on the transport sector in East Africa?
-
32. What are by- laws?
-
33. How can transport difficulty be solved in mountainous areas?
-
34. Why did Tanganyika (Tanzania) gain her independence before other East African countries?
-
35. Give any one challenge faced by security organs in Uganda as they carry out their duties.
-

For each of the questions 36 – 40 answer either Christian Or

Muslim question but Not both in a particular number.

36. Either: Name the material God used to create Eve.

.....

Or: Name the material Allah used to create Hawa.

.....

37. Either: How did Jesus behave towards his earthly father?

.....

Or: How did prophet Muhammed behave towards his uncle?

.....

38. Either: Mention any one way in which a Christian can keep away from evil.

.....

Or: Mention any one way in which a Muslim can keep away from evil.

.....

39. Either: Mention the last prophet in Christianity.

.....

Or: Mention the last prophet in Islam.

.....

40. Either: Why should Christians observe the ten commandments?

.....

Or: Why should Muslims follow the pillars of Islam?

.....

SECTION B (60 MARKS)

41. (a) Which type of budget brings happiness in a family?

.....

(b) Name the organ of a democratic government prepares a national

budget.

.....
(c) State any one way of overcoming a deficit budget in a country.

.....
(d) Give one reason why a country should prepare a budget before spending.

.....
42. (a) Complete the table below correctly.

Scheme	Main crop	Source of water
Nsimbe	R.Mayanja
.....	cotton	Blue Nile
Mwea – Tebere	R.Tana
Kilombero	R.Kilombero

43. (a) Which organization was replaced by African union?

43. (a) Which organization was replaced by African union?

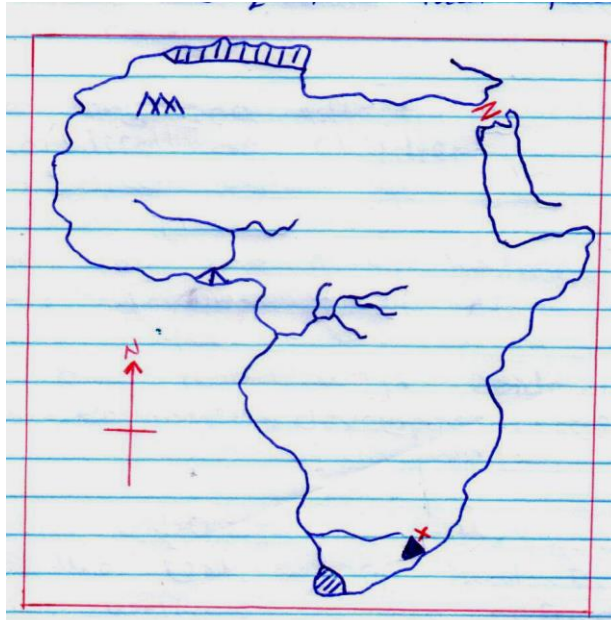
.....
(b) Name the organ of African union that runs the day to day activities of the organization.

.....
(c) Mention any two challenges faced by the African Union today.

(i).....

(ii).....

44. **Study the sketch map of Africa below and answer the questions that follow.**



(a) Name the vegetation zone shaded on the map above.

.....

(b) How was mountain marked **X** formed?

.....

(c) Use letter **F** to show the river that carries the largest volume of water to the sea.

(d) Why was the water passage marked **Z** built?

.....

45. (a) What is child labour?

.....

(b) Mention any one form of child labour.

.....

(c) State any one cause of child labour in our community.

.....

(d) Give any one effect of child abuse on the life of children.

.....

46. (a) State any one factor hindering the economic development of

African countries.

.....
(b) Give any two ways epidemics can affect economic development of a country.

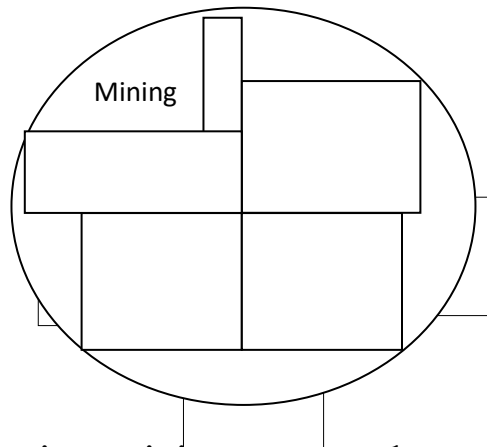
(i).....

(ii).....

(c) Name the UN agency that is responsible for the welfare of the refugees.

.....

47. **Study the pie – chart below and answer the questions that follow.**



(a) Which economic activity is done by most people in the area above?

.....

(b) Mention the least done economic activity according to the pie-chart above.

.....

(c) Name the economic activity which is affected by poaching according to the pie- chart.

.....

(d) How do people of the above area benefit for agriculture?

.....

48. (a) Why was Egypt interested in colonizing Uganda?

.....

(b) Name the German official who helped to establish German rule in East Africa.

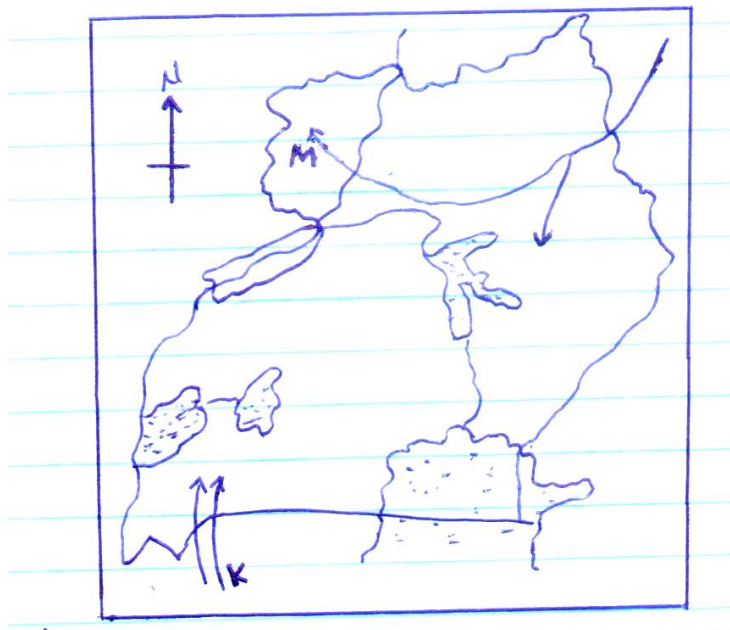
.....

(c) Give any two reasons why German rule was resisted in East Africa.

(i).....

(ii).....

49. **Study the sketch map below and use it to answer questions that follow.**



(a) Name the ethnic group that used route **K** to enter Uganda.

.....

(b) Which plain – Nilote tribe settled at place marked **M**?

.....

(c) State any two problems faced by early migrants during their movement.

(i).....

(ii).....

50. (a) Give one reason why Newspapers are not commonly used in rural areas.

.....

(b) How has Newspaper means of communication promoted trade in Uganda?

.....

(c) Apart from Newspapers, mention any other two means of mass-media used in Uganda.

(i).....

(ii).....

For each of questions 51 to 55 answer EITHER Christianity OR Islam BUT NOT both in a particular number.

51. **EITHER:**

(a) Give any two ways a Christian parent can promote peace among family members.

(i)

(ii)

(b) Mention any two causes of mis-understandings among Christian families today.

(i)

(ii)

OR:

(a) Give any two ways a Muslim parent can promote peace among family

members.

(i)

(ii)

(b) Mention any two causes of mis-understandings among Muslim families today.

(i)

(ii)

52. EITHER:

Match and re-write the prophets in list A with what they are remembered for in list B correctly.

List A prophet	List B what they are remembered for
Abraham	• Deliverance
Job	• Faith
Moses	• Baptized Jesus Christ
John the Baptist	• Perseverance, patience and endurance

(i) Ahraham -

(ii) Job-

(iii) Moses -

(iv) John the Baptist -

OR:

Match and re-write the prophets in list A with what they are remembered for in list B correctly.

Prophet	What they are remembered for
Ibrahim	• Deliverance
Ayyub	• Faith
Musa	• Perfection of Islam

Muhammad	<ul style="list-style-type: none"> • Perseverance and endurance
----------	--------------------------------------------------------------------------------

(i) Ibrahim

(ii) Ayyub

(iii) Musa

(iv) Muhammad

53. Either:

“Do not come any closer. Take off your sandals” Exodus 3: 5 – 8

(a) Who said the above words?

.....

(b) To whom were the above words mentioned?

.....

(c) Why was the above person ordered to remove the sandals?

.....

(d) Give the major reason why the person named in the question ”b” above covered his face when he heard the words.

.....

Or:

“when there comes the help of Allah to you against your enemies and the conquest of Makkah. You will see people joining Islam in crowds” Surat Al Nasru 110.

(a) Who said the above words?

.....

(b) To whom were the above words mentioned?

.....

(c) Why did the person mentioned in A above say those words?

.....

(d) Mention the place where the above words were mentioned.

.....

54. **Either:**

(a) Draw the two larger lights God created to rule over day and night.

(i)

Day

(ii)

Night

(b) Name the creature God made in His image.

.....

(c) Why did God make the creature mentioned in question “b” above in His image?

.....

Or:

(a) Draw the two larger lights Allah created to rule over day and night.

(i)

(ii)

(b) Name the creature Allah made in His image.

.....

(c) Why did Allah make the creature mentioned in question “b” above in His image?

.....

55. **Either:**

(a) Name the religious organization which unites all Christian sects in Uganda.

.....

(b) Mention any two economic contributions of religious organizations in Uganda.

(i)

(ii)

(c) Give any one problem faced by Christian organizations in Uganda today.

.....

Or:

(a) Name the religious organization which unites all Islamic sects in Uganda.

.....

(b) Mention any two economic contributions of religious organisations in Uganda.

(i).....

(ii).....

(c) Give any one problem faced by Islamic organisation in Uganda today.

.....

END