



Dr. Bbosa Science

UGANDA NATIONAL EXAMINATION BOARD
PRIMARY LEAVING EXAMINATION
2010
SOCIAL STUDIES WITH RELIGIOUS EDUCATION
Time allowed: 2hours 15 minutes



Index No:

--	--	--	--	--	--	--	--	--	--

Candidate's name
Candidate's signature.....
School name.....
District Name.....

Read the following instructions carefully

- This paper has two sections **A** and **B**.
Section A has 50 question B has 5 questions. The paper has 15 pages altogether
- Answer all question, **all** answer to both section A and B must be written in the space provided.
- All answer must be written using a blue or black ball point pen or ink. Any work written in pencil other than graphs, picture and diagrams will not be marked.
- Unnecessary change of work may lead to loss of marks
- Any hand writing that cannot easily be read may lead to loss of marks
- Do not fill anything in the boxes indicated: "For examiners". And those inside the question paper

FOR EXAMINERS USE ONLY		
Qn. No	MARKS	EXR'S NO.
1-10		
11-20		
21-30		
31-40		
41-43		
44-46		
47-49		
50-52		
53-55		
TOTAL		

SECTION A (40 MARKS)

Question 1 to 40 carry one mark each

1. Name one of the human basic needs.
.....
2. Which types of climate covers a greater part of Africa
.....
3. What can help a map reader to know the meaning of symbols on a map?
.....
4. What was the title given to the leader to government in Uganda after independence between 1962 and 1966?
.....
5. Give on example of a crater lake in Uganda
.....
6. Name one tribe in Uganda that belongs to the Nilo-Hamates
.....
7. In which country in east Africa were the Akidas and Jumbe used by colonialists to rule?
.....
8. State any one way in which the partition of East Africa affected some tribe
.....
.....
9. State one reason why some people cannot proper health services in your community.
.....
.....
10. Give one way in which communication has become easy in Uganda.
.....
.....
11. State the use of a wind-sock at a weather station.
.....
.....
12. Which ministry is responsible for major roads in Uganda?
.....
13. How kind of vegetation mostly provides food for mountain gorillas?
.....
14. How were the British colonialists able to communicate with the local people?
.....
15. Why was the Berlin conference important to the European countries?
.....
16. Apart from the Judiciary and the Executive. Name one other arm of government.
.....
.....
17. Give any one way in which a time table puts order in a class
.....
.....

18. Where is snow found in East Africa.

.....

19. Mention any **one** way in which stories of origin of tribe are important to the people of Uganda.

.....

.....

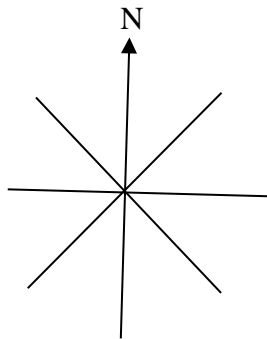
20. State any one problem an area would face if it received no rain throughout the year.

.....

21. Give any one source of power used in copper smelting in Zambia

.....

22. Show the direction of south East on the compass below.



23. Apart from being the first president of Kenya, give any one other reason why Jomo Kenyatta is remembered in the history of Kenya.

.....

.....

24. Give one way in which one becomes a citizen of Uganda.

.....

25. What shows that Uganda was once colonized by the British .

.....

.....

26. Mention one benefit of having a midwife in the community.

.....

.....

27. How commercial banks do helps people to develop?

.....

.....

28. Why is strip cropping practiced in area which are hilly?

.....

.....

29. Give any one reason why there was a mutiny of Sudanese soldiers in Uganda.

.....

.....

30. What is an Oasis

.....
.....

31. What is the greatest cause of environmental degradation in most parts Africa?

.....
.....

32. When does a bill become law in Uganda?

.....
.....
.....

33. State on reason why there is title trade among the East Africa countries.

.....
.....

34. Why did the people of Kenya support the Mau-Mai rebellion?

.....
.....

35. Give the main occupation of people who live dry areas of East Africa.

.....
.....

36. Why is the year 1894 important in the history of Uganda?

.....
.....

For each of the question 53 to 55, answer EITHER the Christian OR Islam question but not both. No marks will be awarded to a candidate who attempts both alternatives.

37. . EITHER

Give reason why Christians kneel during prayers?

.....
.....

OR

Why do Moslems stand in row during prayers?

.....
.....

38. EITHER

Give one way in which Christian can show love to the people they live with.

.....
.....

OR

Give one way in which Moslems can show love to the people they lie with.

.....
.....

39. EITHER

Apart from repentance, give one thing Christians can do to renew their faith in God.

.....
.....
OR

Apart from repentance, give one act which can help Moslems renew their faith in Allah.
.....
.....

40. EITHER

Why did Adam and Eva fail to live in peace forever?
.....
.....

OR

Why did Adam and Hawa fail to have in peace forever?
.....
.....

SECTION B: (60 MARKS)

Question 41 to 55 carry four marks each

41. (a) State any two reasons for keeping domestic animals.

- i.
- ii.

(a) Give any two reasons why some homes do not keep domestic animals.

- (i)
- (ii)

42. (a) Into which Sea does River Nile flow?
.....
.....

(b) State any two advantages of River Nile to the people who live along it

- (i)
- (ii)

(b) Give any one problem that people who live along River Nile experience
.....

43. Write down any two causes of famine in Africa.

- (i)
- (ii)

(b) State two ways in which illiteracy may lead to poor farming practice.

- (i)
- (ii)

44. (a) Why was Kabaka Mwanga afraid for foreigner coming to Buganda through the East?

.....
.....

(b)Where did Bishop Hannington meet his death on his way to Buganda?

.....

(c) State any one way in which the imperial British East Africa company (IBEACO) helped missionaries to work in Uganda.

.....
.....

(c) Give any one way the missionaries helped in the development of Uganda.

.....
.....

45.(a) Apart from Uganda and Kenya, mention two other countries which are member of the East African community.

- (i)
- (ii)

(b)Give anyone reason why Uganda should live peacefully with her neighboring countries.

- (iii).....
- (iv).....

45. (a) What kind of goods are usually transported by ship?

.....
.....

(b) Why are flowers transport from Uganda to Europe by air.

.....
.....

(c) Give two disadvantages of air transport.

- (i)
- (ii)

47.(a) write down two advantages of a large population in an area.

- (i)
- (ii)

(b)State two problem a used by a big increase of population in an area.

- (i)
- (ii)

48. (a) What is solar energy?

.....

(b) What is Hydroelectric power?

.....

(c) Give two reasons why people in rural areas do not use electricity.

- (i)
- (ii)

49. The Democratic Republic of Congo has a lot of natural resources.

(a) Name any two natural resources found in the Democratic Republic of Congo.

- (i).....
- (ii)

(b) Give two reasons why the Democratic Republic of Congo has not been able to use natural resources fully.

- (i).....
- (ii)

48. (a) Give two reasons why Robusta coffee is grown more than Arabica coffee in Africa.

- (i).....
- (ii).....

(a) Mention two problems that coffee farmers face.

- (i).....
- (ii)

51. Use the map of Africa below the question that follows.



(a) Name the water passage marked with X

.....

(b) Mention one economic activity carried out in the area marked Y

.....
.....

(c) Why is the region marked CCC sparsely populated?

.....
.....

(d) How were the mountain ranges marked L formed.

.....
.....

52.(a) Give any two economic advantages of the growth of industries in country.

- (i)
- (ii)

(b) State any two reasons why it is necessary to build industries in rural areas.

- (i)
- (ii)

For each of the question 53 to 55, answer EITHER the Christian OR Islamic question but not both. No marks will be awarded to a candidate who attempts both alternatives.

53.EITHER

(a) Who committed the original sin?

.....
.....

(b) Why is it called the original sin?

.....
.....

(c) State any two ways through which man is punished for the original sin.

- (i)
-
- (ii)
-

OR

(a) Who committed the original sin?

.....
.....

(b) Why is it called the original sin?

.....
.....

(c) State any two ways through which man is punished for the original sin

- (i).....
- (ii)

54. EITHER

(a) Why did God give Moses the Ten Commandments?

.....

(d) How does keeping the Ten Commandments help Christian?

(i) On earth?

.....
.....

(ii) After death?

.....
.....

(c) Give one way in which a constitution is similar to the ten commandments.

.....

OR

a) Why did God give Musa the pillars of Islam?

.....
.....

(d)How do the pillars of Islam help Moslems.

(i) On earth?

.....
.....

(ii) After death?

(c) Give one way in which the pillar of Islam are similar to a construction.

.....

55. EITHER

(a) What happened when Jesus was baptized in River Jordan?

.....

(b) Why did Jesus accept to be baptized and yet He was the son of God?

.....

(c) Give any one reason why water is used in baptism.

.....

(d) What happened to a person when he or she is baptized?

.....

OR

(a) What is the first prayer for the day in Islam?

.....

(b) Why is this prayer important?

.....

(c) Name the prayer performed immediately the sun sets.

.....

(d) How does fasting helps in the health of Moslems?

.....

END



Dr. Bbosa Science

UGANDA NATIONAL EXAMINATION BOARD
PRIMARY LEAVING EXAMINATION

2010 **Answers**

SOCIAL STUDIES WITH RELIGIOUS EDUCATION

Time allowed: 2hours 15 minutes



digitalteachrs.co.ug

Index No:

--	--	--	--	--	--	--	--	--

Candidate's name

Candidate's signature.....

School name.....

District Name.....

Read the following instructions carefully

- 7. This paper has two sections **A** and **B**.
Section A has 50 question B has 5 questions. The paper has 15 pages altogether
- 8. Answer all question, **all** answer to both section A and B must be written in the space provided.
- 9. All answer must be written using a blue or black ball point pen or ink. Any work written in pencil other than graphs, picture and diagrams will not be marked.
- 10. Unnecessary change of work may lead to loss of marks
- 11. Any hand writing that cannot easily be read may lead to loss of marks
- 12. Do not fill anything in the boxes indicated: "For examiners". And those inside the question paper

FOR EXAMINERS USE ONLY		
Qn. No	MARKS	EXR'S NO.
1-10		
11-20		
21-30		
31-40		
41-43		
44-46		
47-49		
50-52		
53-55		
TOTAL		

SECTION A (40 MARKS)

Question 1 to 40 carry one mark each

- 46. Name one of the human basic needs.
Food, education, water, medical care, shelter, or clothes
- 47. Which types of climate covers a greater part of Africa
Tropical climate
- 48. What can help a map-reader to know the meaning of symbols on a map?
Key
- 49. What was the title given to the leader to government in Uganda after independence between 1962 and 1966?
Prime minister/ executive Prime minister
- 50. Give on example of a crater lake in Uganda
Lake katwe
Lake Nyamumuka

Lake Munyanyanga

Lake Muhavura

Lake Kataboganda

Lake Nakasura

51. Name one tribe in Uganda that belongs to the Nilo-Hamates

Iteso, Karamajong, Kumam, Jie, Dodoth, Kakwa, pokot, tepeth, Pian, Bokora, Upe or Labwor.

52. In which country in east Africa were the Akidas and Jumbe used by colonialists to rule?

Tanzania or Tanganyika

53. State any one way in which the partition of East Africa affected some tribe

- Loss of independence
- Separation of some tribes
- Culture lost
- People lost land
- Division of people

54. State one reason why some people cannot proper health services in your community.

- Poverty
- Unemployment
- Poor transport network
- Remoteness of some places
- Inadequate drugs
- High population growth
- Corruption
- Ignorance
- Illiteracy
- Shortage of trained personnel
- Insecurity

55. Give one way in which communication has become easy in Uganda.

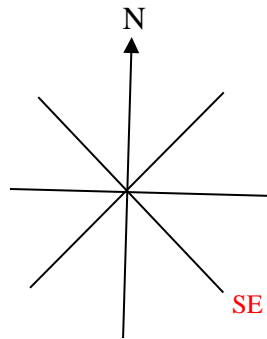
- Introduction of mobile phones
- Introduction of many radio and TV stations
- Introduction of many Newspapers
- Introduction of internet
- Introduction of computers
- Improved transport network
- Good leadership structure (LCs, RDCs, MPS)
- Improved education system
- Use of poster, neon sign and billboards
- Use of banners/flyers/brochures

56. State the use of a wind-sock at a weather station.

- To measure strength/direction of wind

57. Which ministry is responsible for major roads in Uganda?

- Ministry of works and transport
58. How kind of vegetation mostly provides food for mountain gorillas?
- Forest/tree/bomb tree
59. How were the British colonialists able to communicate with the local people?
- Through interpreters
 - Through the local chiefs and kings
 - Through the collaborators/agents
60. Why was the Berlin conference important to the European countries?
- Helped them to acquire colonies in Africa peacefully
 - Helped them to share African countries
61. Apart from the Judiciary and the Executive. Name one other arm of government.
- The legislator/Parliament/National Assembly
62. Give any one way in which a time table puts order in a class
- Avoid collision of lessons
 - Helps in proper time management
 - Helps children and teachers to prepare for the next lesson
 - Show/controls classroom activities.
 - Helps teachers and learners to know what to do in class
63. Where is snow found in East Africa.
- On very tall mountaintops above the snowline. (mountains only is wrong) or mention names of the mountains with snow such as Mt. Rwenzori, Elgon, Kenya tops)
64. Mention any **one** way in which stories of origin of tribe are important to the people of Uganda.
- To know their origin/history/ancestry,
 - To promote their culture/heritage
 - For identity
 - For unity and harmony
 - For moral building
 - For social interaction.
65. State any one problem an area would face if it received no rain throughout the year.
- Shortage/scarcity of water
 - Shortage/scarcity of pasture
 - Shortage of food/famine
 - High temperature
 - Crops will dry/wither
 - Crops will not grow
 - Leads to death of animals and people
 - Leads to malnutrition
 - Leads to too much dust
66. Give any one source of power used in copper smelting in Zambia
- Running water/coal/River Zambezi
67. Show the direction of south East on the compass below.



68. Apart from being the first president of Kenya, give any one other reason why Jomo Kenyatta is remembered in the history of Kenya.
- Was a political leader of Mau Mau
 - Established prosperity for all/Harambe scheme
 - He was a leader of KANU (reject founder of KANU)
 - He was a founder member of KANU
 - He was a founder member of OAU/EAC.
 - He was Pan Africanism
 - He promoted nationalism
 - He was the first prime minister of Kenya
 - He led Kenya to independence
 - He settled the landless Africans in Kenya
 - He made Kenya the leading Industrialized country in east Africa
 - He was the secretary General of the Kikuyu Central Association
 - He was a member of LEGCO
 -
69. Give one way in which one becomes a citizen of Uganda.
- By birth
 - By decent
 - By registration
 - By marriage
 - By naturalization
 - By adoption
70. What shows that Uganda was once colonized by the British .
- Member of commonwealth of Nations/Commonwealth independent states (CIS)
 - Use English as an official language
 - Participates in common wealth games
 - Uganda attends CHOGM
 - Uganda gets loans/grants from commonwealth fund
 - Uganda hosts and respects the British High Commission
 - Uganda allows Commonwealth observers to oversee its national elections
 - Uganda marks the Commonwealth Day
71. Mention one benefit of having a midwife in the community.
- Helps mothers to deliver babies safely

- Provides antenatal care for pregnant mothers
- Provides medical care to the community
- Helps in control of HIV/AIDS spreads to new-babies,
- Teachers about family planning/Reproductive health
- Provides guidance and counseling services
- Carries out immunization in the community.

72. How commercial banks do helps people to develop?

- Provide loans/accept mortgages from client
- Provides financial advice/sensitization
- Helps to keep and save money
- Provides money transfer services
- Provide employment
- Helps in keeping important documents.

73. Why is strip cropping practiced in area which are hilly?

- To control/prevent soil erosion

74. Give any one reason why there was a mutiny of Sudanese soldiers in Uganda.

- Delayed payment
- Poor feeding
- They were mistreated
- Walking long distances
- They were tired of constant fight

75. What is an Oasis

- An area with water/fertile soil/vegetation in a desert.

76. What is the greatest cause of environmental degradation in most parts Africa?

- High population
- Overstocking
- Search for land for settlement
- Searching for land for farming.

77. When does a bill become law in Uganda?

- After being signed by the president.

78. State on reason why there is title trade among the East Africa countries.

- Lack of capital/poverty
- Production of similar goods
- Difference in currency/money
- Smuggling of goods
- Problem of poor transport network
- Low level of industrialization
- Competition from foreign goods
- Lack of business skills

79. Why did the people of Kenya support the Mau-Mai rebellion?

- To get independence
- To get back their land

- To oppose discrimination
- To oppose high taxation
- To express pains due to high cost of living
- They wanted representation in the LEGCO

80. Give the main occupation of people who live dry areas of East Africa.

Pastoralism/cattle keeping/animal rearing/nomadic pastoralism

81. Why is the year 1894 important in the history of Uganda?

- When Uganda was declared/made/a British protectorate

For each of the question 53 to 55, answer EITHER the Christian OR Islam question but not both. No marks will be awarded to a candidate who attempts both alternatives.

82. . EITHER

Give reason why Christians kneel during prayers?

- to show respect to God
- to humble themselves before Good

OR

Why do Moslems stand in row during prayers?

- To avoid satanic influence
- To be organized in prayer.
- It is one of the pillars of prayers
- Sign of humbleness
- Sign of respect to Allah.
- To emulate/copy the acts of Angels
- Sign of equality of Muslim

83. EITHER

Give one way in which Christian can show love to the people they live with.

- By sharing things with others
- Felling sympathetic to them
- Caring for them
- Comforting them
- Praying together/Praying
- Playing together
- Paying visit to them
- Taking them form medical care when they are sick
- Guiding and counselling them
- Greeting them
- Attending burial
- Feeding them

OR

Give one way in which Moslems can show love to the people they lie with.

- By sharing things with others
- Felling sympathetic to them
- Caring for them
- Comforting them
- Praying together/Praying
- Playing together
- Paying visit to them
- Taking them form medical care when they are sick
- Guiding and counselling them
- Greeting them
- Attending burial
- Feeding them

84. EITHER

Apart from repentance, give one thing Christians can do to renew their faith in God.

- Through fasting
- Through going for pilgrimages
- Performing charity walks
- Fellowshiping/congregation
- Reading the bible
- Through praying regularly
- Giving alms/paying tithes

OR

Apart from repentance, give one act, which can help Moslems renew their faith in Allah.

- Fasting,
- paying Zakat/alms giving
- reciting the Quran
- praying
- going for pilgrimages
- Fulfilling the pillars (shahat, salat, zakat, saum, Hujj (accept specific pillars)
- Congregation
- Listening to the preaching (summons)
- Attending burial

85. EITHER

Why did Adam and Eva fail to live in peace forever?

- Due to their disobedience/sinning/they ate forbidden fruit

OR

Why did Adam and Hawa fail to have in peace forever?

- Due to their disobedience/sinning/they ate forbidden fruit

SECTION B: (60 MARKS)

Question 41 to 55 carry four marks each

86. (a) State any two reasons for keeping domestic animals.

- Source of food
- Source of income
- For medicine
- Source of raw material
- For transport
- For ploughing
- For cultural/ceremonial activities
- source of employment
- for prestige
- for study purpose
- source of manure
- for protection/Security/guide e.g. dog
- For settling disputes/paying fine

(d) Give any two reasons why some homes do not keep domestic animals.

- Shortage of enough land
- Due to cultural/religious beliefs
- Lack of scientific skill in animal management
- Some homes are located in insecure places
- Avoiding conflicts with neighbours
- Ignorance and lack of commitment
- Due to poverty
- due to animal diseases

87. (a) Into which Sea does River Nile flow?

- Mediterranean Sea

(b) State any two advantages of River Nile to the people who live along it

- Fishing ground
- Source of water for industrial use
- Source of water for domestic use
- Source of water for irrigation
- R. Nile attracts tourists to buy local products
- Some parts of R. Nile are used for transport
- Generation of hydroelectricity
- The valley has fertile land for farming
- R. Nile is used for recreation
- Modifies climate/contributes to rain formation
- Source of raw materials for crafts
- For study purposes

(e) Give any one problem that people who live along River Nile experience

- Regular flooding
- Silting
- Water borne diseases
- High temperature
- Some parts are difficult to cross
- Drowning

- Water weeds make it difficult to fish

88. Write down any two causes of famine in Africa.

- infertile soils
- Insecurity/civil wars
- Poor farming methods
- Pests and diseases
- Natural disasters
- Poverty
- Poor farming method/illiteracy
- Poor attitude towards work

(b) State two ways in which illiteracy may lead to poor farming practice.

- People will not know how to practice modern farming.
- People may not be able to identify proper drug for controlling crop diseases/pest
- People will not be able to keep farm records
- People will resist change from traditional to modern farming methods
- Farmers may fail to interpret and use printed information on farming

89. (a) Why was Kabaka Mwanga afraid of a foreigner coming to Buganda through the East?

- He thought they would overthrow him
- Foreigners from the east were taken as enemies of Buganda

(b) Where did Bishop Hannington meet his death on his way to Buganda?

- Busoga/Mayuge/Kyanda/Luba's Fort/Palace Bunya

(c) State any one way in which the Imperial British East Africa Company (IBEACO) helped missionaries to work in Uganda.

- They protected the missionaries

(d) Give any one way the missionaries helped in the development of Uganda.

- They introduced new crops
- They built roads
- They helped stop slave trade
- They introduced formal education
- They taught practical skills
- They built churches/missions
- They improved on medical services/built health centers/hospital
- Build schools
- They introduced Christianity/Western culture

90. (a) Apart from Uganda and Kenya, mention two other countries which are members of the East African community.

- Tanzania, Burundi, Rwanda, Southern Sudan

(b) Give any one reason why Uganda should live peacefully with her neighboring countries.

- to use the neighbours support
- to promote trade
- to foster regional co-operation
- to create employment for her people
- to share social services
- to have free movement of people, goods and service
- to promote development
- for industrial development
- for political stability.

91. (a) What kind of goods are usually transported by ship?

- Bulky/heavy goods
- Nonperishable good
- Fragile good

(b) Why are flowers transport from Uganda to Europe by air.

- They are perishable good

(c) Give two disadvantages of air transport.

- It is expensive
- Not common
- For security/protection
- Maximum utilization of resource

92. (a) Write down two advantages of a large population in an area.

- Offer a large/ready market
- Enough labour
- High tax base
- For security/protection
- Maximum utilization of resource

(b) State two problems caused by a big increase of population in an area.

- High crime rate
- Easy spread of disease
- Land fragmentation
- Unemployment
- Shortage of social service
- Environmental degradation
- Poor sanitation
- Shortage of food
- Overcrowding/poor accommodation
- Development of slum
- Over exploitation of natural resource

49. (a) What is solar energy?

- Power/electricity/Energy from the sun

(b) What is Hydroelectric power?

- Power/electricity from fast flowing Water (water alone is not correct)

(c) Give two reasons why people in rural areas do not use electricity.

- Lack of electricity in some areas
- Electricity is expensive

50. 49. The Democratic Republic of Congo has a lot of natural resources.

(a) Name any two natural resources found in the Democratic Republic of Congo.

- Minerals/copper, coal, diamond, gold, zinc, cobalt
- Water bodies
- Animal/wildlife
- Forests/timber/wood
- People/human resource
- Good climate
- Fertile soil

(b) Give two reasons why the Democratic republic of Congo has not been able to use natural resources fully.

- Poverty/lack of capital
- Lack of skilled labour
- Low level of technology
- Poor transport system
- Insecurity
- Poor leadership

51. (a) Give two reasons why Robusta coffee is grown more than Arabica coffee in Africa.

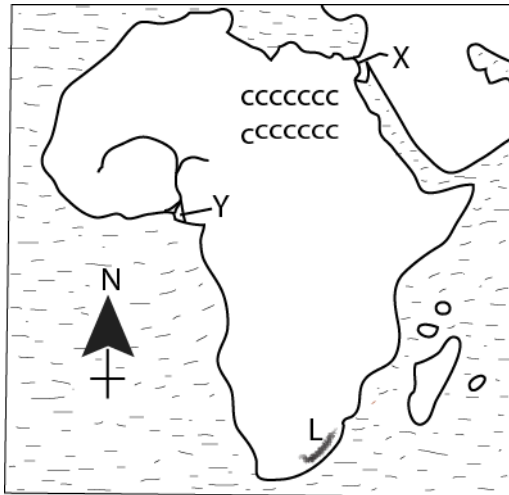
- Robusta is more resistant to diseases than Arabica.
- Robusta coffee can grow in more places than Arabica coffee.
- Robusta coffee is more resistant to drought than Arabica
- Robusta coffee needs less labour than Arabica
- Robusta coffee has higher yields than Arabica
- Robusta coffee matures faster than Arabica
-

(b) Mention two problems that coffee farmers face.

- Pests and diseases
- Competition with other crops grown for beverages

- Poor marketing system
- Shortage of pulping machines
- Changes in climate
- Poor storage facilities
- Land slides

51. Use the map of Africa below the question that follow.



(c) Name the water passage marked with X

- Sues canal

(d) Mention one economic activity carried out in the area marked Y

- Oil drilling/mining
- Farming
- Fishing
- tourism

(c) Why is the region marked CCC sparsely populated?

- It is desert/it is hot and dry
- Poor transport system
- Poor soil fertility

(d) How were the mountain ranges marked L formed.

- Through volcanicity

52.(a) Give any two economic advantages of the growth of industries in country.

- Create employment/high standard of living
- Manufactured goods are made available to people

- Lead to the development of the country/infrastructure.
- Create market for raw materials
- Source of revenue to government

(b) State any two reasons why it is necessary to build industries in rural areas.

- Control rural-urban migration
- Creates employment for rural people
- Creates market for the rural products
- Leads to development of infrastructure or country
- Develop rural areas
- Encourage urban-rural migration
- Manufactured goods are made available to the rural people.

For each of the question 53 to 55, answer EITHER the Christian OR Islamic question but not both. No marks will be awarded to a candidate who attempts both alternatives.

53. EITHER

(d) Who committed the original sin?

- Adam/Eve/Adam and eve

(e) Why is it called the original sin?

- It was the first sin to be committed by human kind

(f) State any two ways through which man is punished for the original sin.

- Suffering
- Death
- Misery
- Hatred/pain
- Hard labour

OR

(e) Who committed the original sin?

- Adam/Hawa/Adam and Hawa

(f) Why is it called the original sin?

- It was the first sin to be committed by human kind

(g) State any two ways through which man is punished for the original sin

- Suffering
- Death
- Misery
- Hatred/pain
- Hard labour
- Shame

54. EITHER

(a) Why did God give Moses the Ten Commandments?

- To guide the Israelite

- Avoiding sinning
- To live in peace and unity with one another.
- Good relationship with God
- To be respected.

(c) How does keeping the Ten Commandments help Christian?

(iii) On earth?

- To behave well
- To avoid sin
- Be faithful
- To live in peace and harmony with one another

(iv) After death?

- To go to heaven/have eternal life
- To go to paradise

(c) Give one way in which a constitution is similar to the Ten Commandments.

- Both are laws
- Both guide people to live a happy life on earth.
- Both help people to protect their rights.
- Both help people to avoid crime

OR

b) Why did God give Musa the pillars of Islam?

- To guide the Muslim believers
- To help them avoid sin
- To live in peace and unity with one another
- To be protected.
- To prepare for Janah
- To live in good relationship with Allah

(b) How do the pillars of Islam help Moslems?

(iii) On earth?

- Shahadat-Unity/oneness of Muslims
- Helps one to be healthy
- Promotes physical fitness
- Sharing of Ideas
- Promotes brotherhood.
- Promotes faith
- Promotes respect for believers
- Promotes responsibility on earth.

(iv) After death?

- Paradise/Janah/eternal life

(c) Give one way in which the pillar of Islam are similar to a construction.

- Both are laws
- Helps to live a happy life
- Help one to avoid sin

55. EITHER

(e) What happened when Jesus was baptized in River Jordan?

- Heaven opened
- God spoke/A voice came from heaven
- The holy spirit came upon Jesus in form of a dove

(f) Why did Jesus accept to be baptized and yet He was the son of God?

- To fulfill the scripture
- To show example to other people
- To identify with human kind
- To confirm the work of John the Baptism

(g) Give any one reason why water is used in baptism.

- A symbol to wash away they original sin
- In remembrance of the water and blood flowing from Jesus

(h) What happened to a person when he or she is baptized?

- One becomes a member of God's family
- Qualifies one to receive other sacraments
- One becomes committed to Jesus in life
- One becomes free from the original sin

OR

(e) What is the first prayer for the day in Islam?

- Subuhi/Fijir

(f) Why is this prayer important?

- To thank God/Allah for the night
- To ask for Allah's blessing in the day
- To ask for Allah's protection
- To ask for Allah's guidance
- To ask for the provision of the daily needs.

(g) Name the prayer performed immediately the sun sets.

- Magarib/Fajir

(h) How does fasting helps in the health of Moslems?

- Stabilizes digestion
- Reduces weight/excess fats
- Eliminates poisonous wastes from the body.

END