

NAMAGUNGA PRIMARY BOARDING SCHOOL
P.7 REVISION WORK (SET TWO) TERM I 2020
SOCIAL STUDIES & RELIGIOUS EDUCATION

Time allowed: 2 Hours 15 Minutes

EMIS NO.						PERSONAL NO.		

Index No;

Candidate's Name:.....

Candidate's Signature:.....

District:.....

DO NOT OPEN THIS BOOKLET UNTIL YOU ARE TOLD TO DO SO

FOR EXAMINERS' USE ONLY

Read the following instructions carefully:

1. This paper has **two** Sections: **A** and **B**.
2. Section **A**, has **40** questions (40 marks)
3. Section **B** has **15** questions (60 marks).
4. Answer **ALL** questions: All answers to both Sections **A** and **B** must be written in spaces provided in full sentences.
5. All answers must be written using a blue or black ballpoint pen or ink but not pencil. All work done in pencil except diagrams will **NOT** be marked.
6. Unnecessary alteration of work will lead to loss of marks.
7. Any handwriting that cannot be easily read, may lead to loss marks.

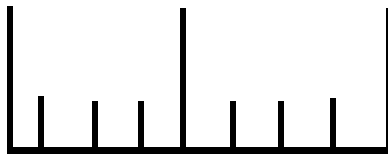
FOR EXAMINERS' USE ONLY		
QN. NO.	MARK	SIGN
1-10		
11-20		
21-30		
31-40		
41-43		
44-46		
47-49		
50-52		
53-55		
TOTAL		

SECTION A

1. Name the manmade feature that makes road transport across rivers and streams possible.
.....

2. What does the white circle in the middle of the Uganda National flag represent?
.....

3. Name the map symbol drawn below.



.....

4. Mention the use of a hygrometer at a weather station.
.....

5. Give one reason for conserving natural forests.
.....

6. Name any one material used to build a temporary house.
.....

7. State any one way the government of Uganda has promoted peace and security in our community.
.....

8. What title is given to the political head of a district in Uganda?

.....
9. Apart from using a compass, how else can sailors locate places on a sea?
.....

10. Mention any one way refugees benefit from United Nations High Commissioner for Refugees (UNHCR)
.....

11. State any one way in which improved road network promotes trade in an area.
.....

12. Give any one challenge facing modern democracy in Africa.
.....

13. State any one reason why the British promoted cash crop growing in Uganda.
.....

14. Mention any one way in which man has mismanaged the land resource in our community.
.....

15. What factor made Ethiopia a land locked country?
.....

16. Name the enclave state of Africa in the Southern region.
.....

17. Write down one characteristic of Lake Tanganyika in East Africa.

.....

18. It is 4:00.a.m. in Accra, Ghana. What is the time in Dakar, Senegal which lies along 15°W?

.....

19. State any one danger of corruption to the economy of Uganda.

.....

20. Mention one effect of HIV/AIDS on the country's economy.

.....

21. Which group of people introduced the idea of iron smelting in Uganda?

.....

22. Why are deserts very hot during day and very cold during nights?

.....

23. Give any one similarity common among former British colonies.

.....

24. Which natural vegetation is located along the East African coast?

.....

25. What term is used to mean the massive movement of the Boers from Cape Colony to the interior of South Africa?

.....
26. Why is tourism called an invisible export?

.....
27. Which African Nationalist was the political leader of Mau Mau in Kenya?

.....
28. Name the type of education which existed in Africa before the coming of Christian Missionaries.

.....
29. State any one effect of strong wind on water transport.

.....
30. Give any one reason why barter system of trade is not common today.

.....
31. Why does the wind ward side of a mountain receive much rainfall?

.....
32. Apart from oral tradition, how can we get information about the past?

.....
33. What is meant by citizenship by birth?

.....
34. Which regional grouping unites the countries of Eastern Africa?

.....
35. State any one benefit of regular family meetings to its members.

.....
FOR QUESTIONS 36-40 ANSWER EITHER CHRISTIANITY OR ISLAM BUT NOT BOTH ALTERNATIVES IN ONE QUESTION.

36. EITHER: Give any one way Jesus showed concern for the sick.

.....
OR: Give any one way Prophet Muhammad showed concern for Allah's people.

.....
37. EITHER: Name the special place where God's faithful people will go after death.

.....
OR: Name the special place where Allah's faithful people will go after death.

.....
38. EITHER: Name the son of Abraham he offered as a sacrifice to God.

.....
OR: Name the son of Prophet Ibrahim he offered as a sacrifice to Allah.

.....
39. EITHER: Why should Christians depend on God?

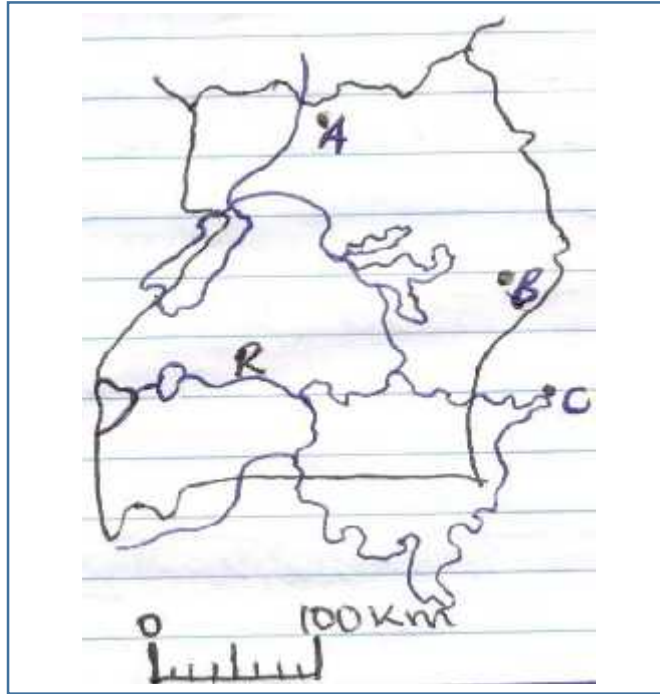
.....
OR: Why should Muslims depend on Allah?

.....
40. EITHER: As a child of God, how can you help fellow children in need?

.....
OR: As a child of Allah, how can you help fellow children in need?
.....

SECTION B:

41. Use the map below to answer the following questions.



a) Name the river marked R.

.....

b) Give the importance of inland port marked C to Uganda.

.....

c) Using the scale above, calculate the ground distance between towns A and B in kilometers.

.....

d) Why is the distance from town A to B shorter by air than by road?

.....

42. a) Who is the highest civil servant in the ministry?

.....

b) Name the symbol of authority used by the speaker of parliament.

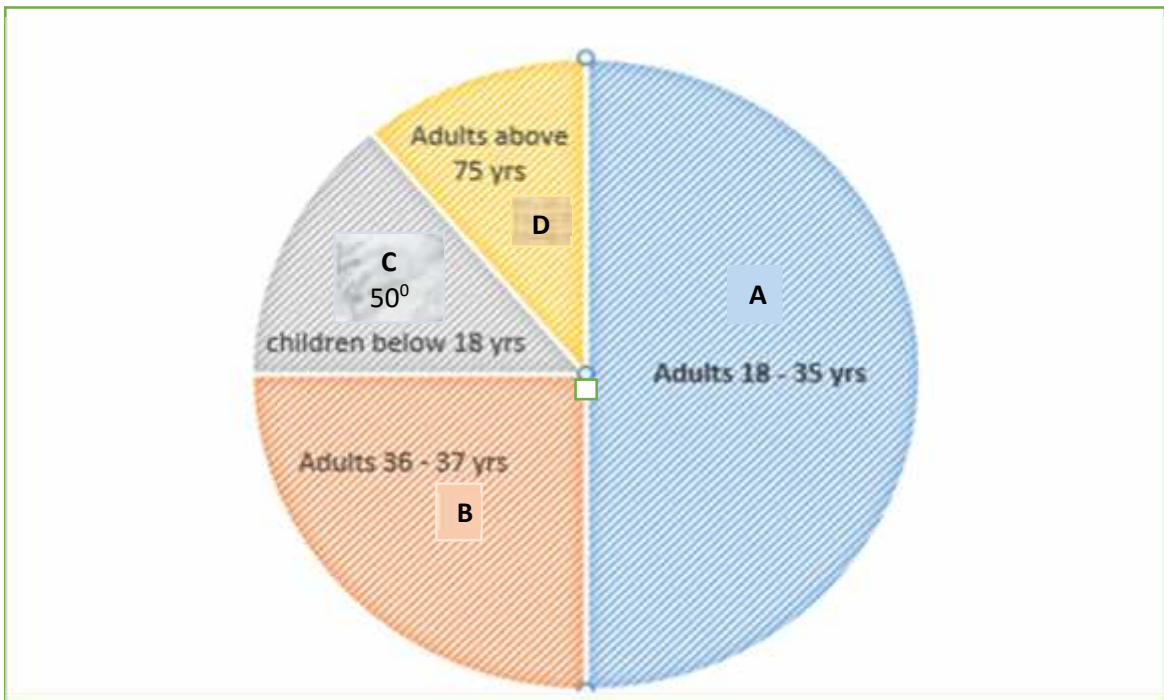
.....

c) State two conditions under which one can lose a parliamentary seat in Uganda.

i)

ii).....

43. Study the pie chart below and answer questions that follow:



a) Give the general name for people aged between 18-35 years.

.....

b) Give the percentage of adults aged between 36-75 years.

.....

c) Why are people in portion D less productive?

.....

d) Why are people in portion C not allowed to take part in a National election?

.....

44.a) Complete the table below correctly:

Rebellion	Main cause
i).....	Forceful registration of guns
ii)MauMau
iii).....	Forced labour
iv).....	Use of luganda as official language in Bunyoro

45. a) List down any two methods used by Europeans to get colonies in Africa.

(i)

(ii)

b) State any two effects of colonial rule in Africa.

(i)

(ii)

46. a) List down any two factors that affect the climate of Africa.

(i)

(ii)

b) Mention major economic activities in the following climatic regions.

(i) Equatorial climatic region

(ii) Mediterranean climatic region

47. a) Mention any one type of minerals.

.....

b) State any two benefits of the mining industry to the national development.

(i)

(ii)

c) Give one danger caused by mining to the environment.

.....

49. a) Why is a television a mass media means of communication?

.....

b) Give any two advantages of mass media communication.

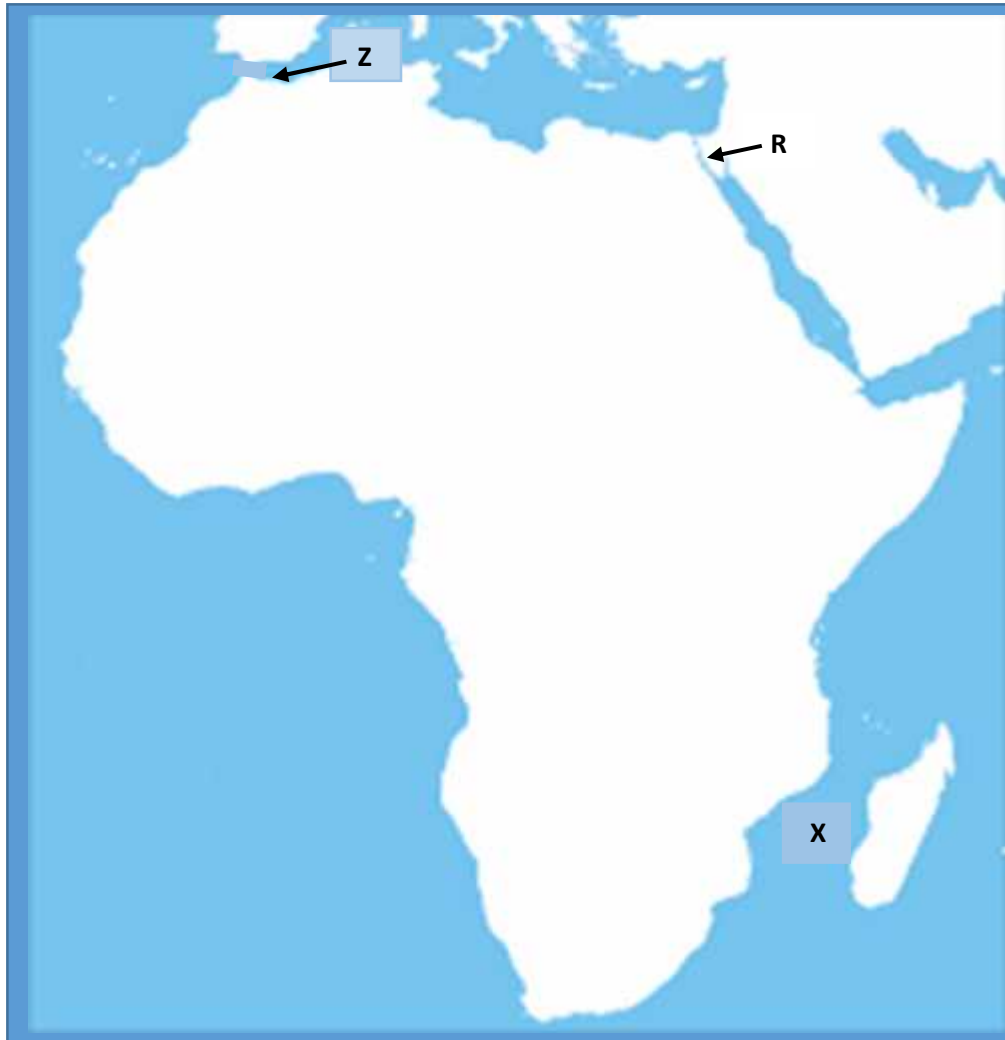
(i)

(ii)

a) Mention any one barrier to effective communication in society.

.....

44. Use the map of Africa below to answer questions that follow:



b) Name the water way marked Z.

.....

c) What is the name of channel marked X on the map?

.....

d) Give two reasons why Europeans took long to enter into the interior of Africa.

(i).....

(ii).....

50. a) What is LEGCO in full?

.....

b) Name any one of the first Africans to join LEGCO in Uganda.

.....

c) State any two factors that led to the formation of LEGCO in Uganda.

(i)

(ii)

FOR QUESTIONS 51-55, ANSWER EITHER CHRISTIANITY OR ISLAM BUT NOT BOTH IN THE SAME NUMBER.

51. EITHER:

a) Who is a martyr?

.....
.....

b) Name the first person to die for Christianity according to the Bible.

.....

c) Mention any two lessons we learn from the acts of the Uganda Martyrs.

(i)

(ii)

OR: a) Who is a martyr?

.....
.....

b) Name the first person to die for Islam according to the Quran.

.....

c) Mention any two lessons we learn from the acts of the Uganda Martyrs.

(i)

(ii)

52. EITHER: a) State any two importance of laws in society according to the Christian teachings.

(i).....

(ii).....

b) Mention any two examples of laws God gave to the Israelites.

(i)

(ii).....

OR: a) State any two importance of laws in society according to the Islamic teachings.

(i).....

(ii).....

b) Mention any two pillars of faith (Iman) in Islam.

(i).....

(ii).....

53. EITHER: a) What is friendship according to the Bible?

 b) State any two importance of friendship in society.
 (i).....
 (ii).....
 c) Give any one thing that can spoil friendship among people.

- OR: a) What is friendship according to the Quran?

 b) State any two importance of friendship in society.
 (i).....
 (ii).....
 c) Give any one thing that can spoil friendship among people.

54. EITHER: Match the Apostles in List A with what they are remembered for about Jesus in list B

Apostles	What they are remembered for
Simon Peter	The most beloved Apostle
Thomas	Betrayed Jesus
Judas Iscariot	Denied Jesus three times
John	Doubted Jesus' resurrection

- a. Simon Peter
 b. Thomas
 c. Judas Iscariot
 d. John

OR: Match the following people in List A with what they are remembered for about Prophet Muhammad in List B.

List A	List B
Abubaker	Grandfather of Prophet Muhammad
Khadija	First successor of Prophet Muhammad
Ali	Cousin of Prophet Muhammad
Abu-Mutwalib	Wife of Prophet Muhammad

- a. Abubakar
- b. Khadija
- c. Ali
- d. Abu – Mutwalib

55. EITHER:

a) What name was given to the first sin committed by Adam and Eve in the Garden of Eden?

.....

b) How did Adam and Eve disobey God?

.....

c) Which creature tempted Eve to disobey God?

.....

d) What was the immediate punishment given to Adam and Eve for disobeying God?

.....

OR: a) What name was given to the first sin committed by Adam and Hawa in the Garden of Eden?

.....

b) How did Adam and Hawa disobey Allah?

.....

c) Which creature tempted Hawa to disobey Allah?

.....

e) What was the immediate punishment given to Adam and Hawa for disobeying Allah?

.....

END